


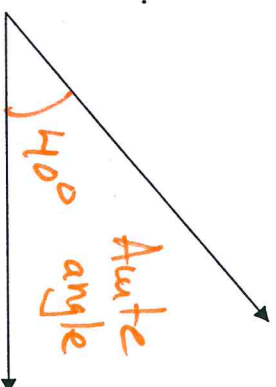
1-6 Example 2

Use a protractor to find the measure of each angle. Then classify each angle as acute, right, obtuse, or straight.


a.



b.



c.



d.

