


NAME: _____

GRADE 2: Unit 3 Study Guide

What time does the clock read?


2.MD.7



- | | | | |
|----|------|-----|----|
| 1) | 1:05 | Yes | No |
| 2) | 3:05 | Yes | No |
| 3) | 1:15 | Yes | No |

- 4) Draw the hour and minute hands to show 10:05.


2.MD.7



- 5) Draw a minute hand on the clock.

2.MD.7

Tell what time the clock reads. _____



Does the group of coins total 30 cents?

2.MD.8

- 6) (D) (D) (N) (N)

Yes

No

- 7) (D) (D) (D) (N)

Yes

No

- 8) (D) (N) (N) (N) (N)

Yes

No

- 9) Using coins, show one way to make 97¢.

2.MD.8

10) You buy a toy that costs 46¢. You have two quarters.


2.MD.8

Do you have enough money? Explain your reasoning.

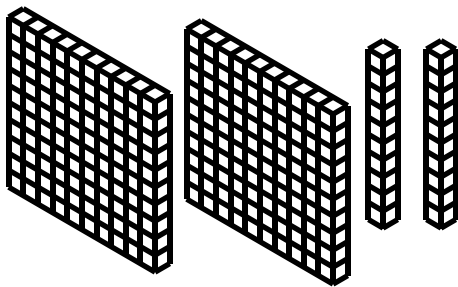
Write the number that the model shows.

2.NBT.1

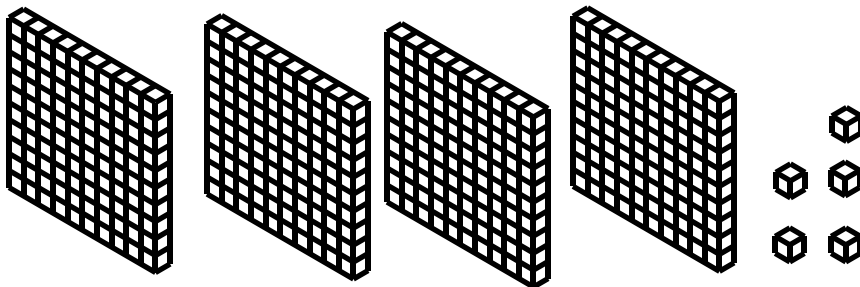
11)



12)



13)



- 14) Draw base ten blocks to represent the number 305.

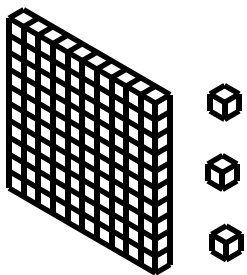
2.NBT.1



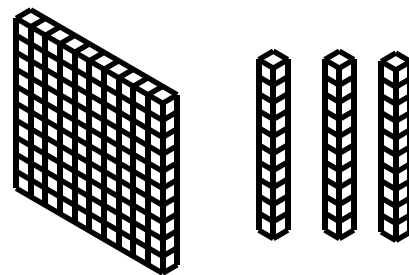
- 15) Bilal and Samer were asked to represent the number 103 using base ten blocks.

2.NBT.1

Bilal:



Samer:



Which student was not correct? _____

Explain the mistake that was made.
