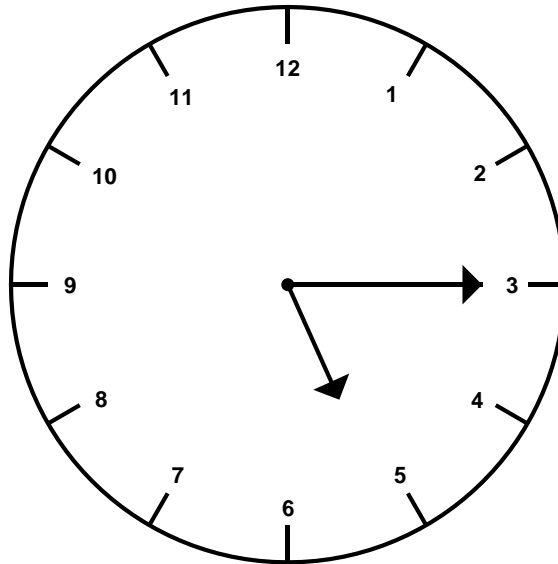


NAME: _____

GRADE 2 PRE TEST – UNIT 3

What time does the clock read?

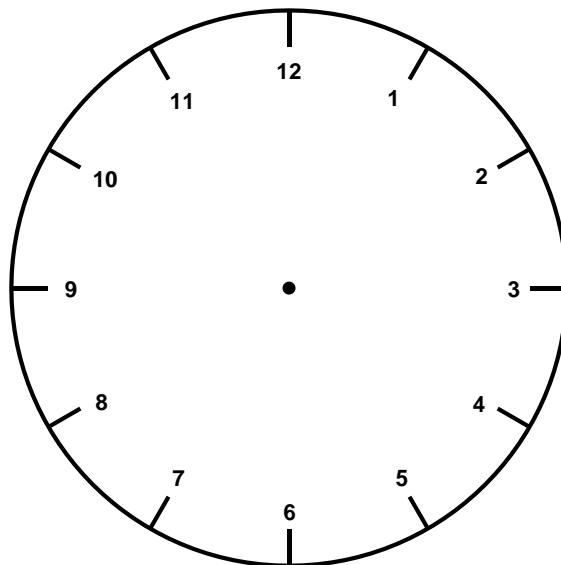
2.MD.7



- | | | | |
|----|------|-----|----|
| 1) | 3:25 | Yes | No |
| 2) | 5:15 | Yes | No |
| 3) | 4:15 | Yes | No |

- 4) Draw the hour and minute hands to show 3:20.

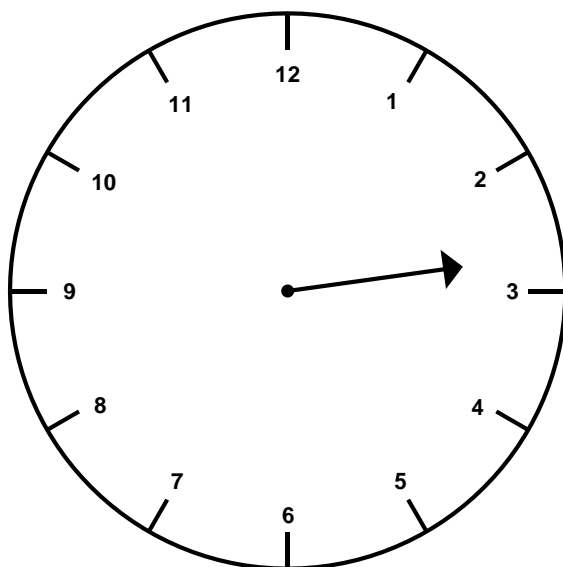
2.MD.7



5) Draw a minute hand on the clock.

2.MD.7

Tell what time the clock reads. _____



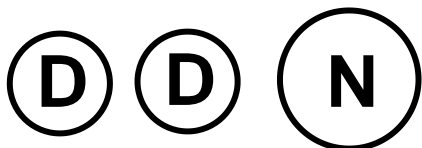
Which groups of coins show \$0.26?

2.MD.8

6)

Yes


No



7)

Yes

No



8)

Yes

No



Show two ways to make 65¢.

2.MD.8

9)

10)

11) Solve the following problem and explain how you know.

2.MD.8

You buy a pack of gum that costs 52¢. You have two quarters.

Do you have enough money?
