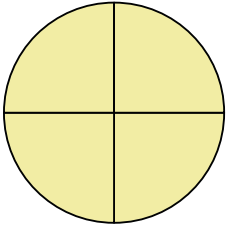


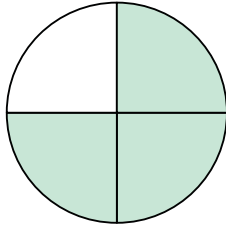
**Determine which letter best describes the shaded portion.****Answers**

1)



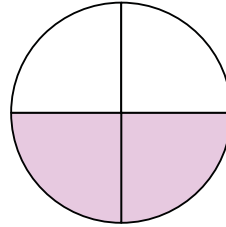
- A. One Quarter
B. Two Quarters
C. Four-Fourths

2)




- A. Three-Fourths
B. One Quarter
C. Two Quarters

3)



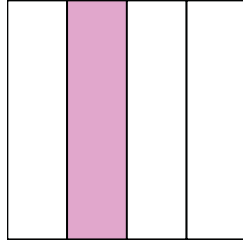
- A. Two-Fourths
B. One Quarter
C. Three Quarters

4)



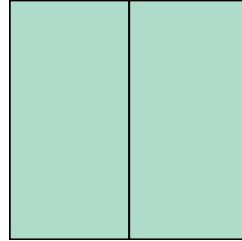
- A. Two Quarters
B. One Quarter
C. Four Quarters

5)



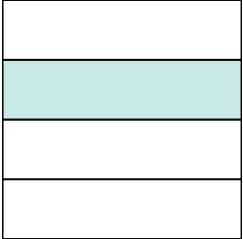
- A. Two Quarters
B. One-Fourth
C. Three Quarters

6)



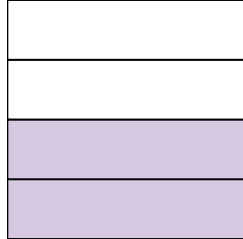
- A. One Quarter
B. Two Halves
C. Two Quarters

7)




- A. One Quarter
B. Three Quarters
C. Two Quarters

8)




- A. One Quarter
B. Two Quarters
C. Three Quarters

9)



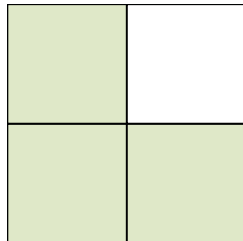
- A. One Quarter
B. Three Quarters
C. One Half

10)



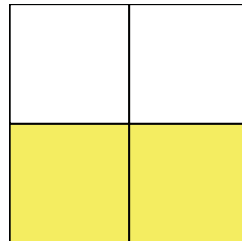
- A. Two Quarters
B. Three Quarters
C. One-Fourth

11)



- A. Two Quarters
B. Three-Fourths
C. One Quarter

12)



- A. One Quarter
B. Three Quarters
C. Two Quarters

1. _____
2. _____
3. _____
4. _____
5. _____
6. _____
7. _____
8. _____
9. _____
10. _____
11. _____
12. _____