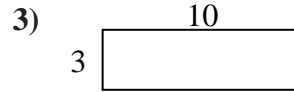
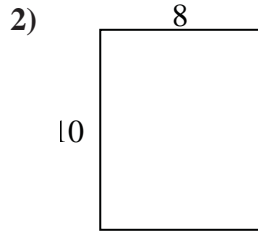
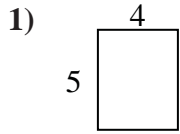


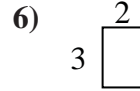
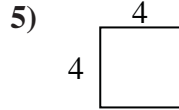
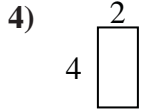


Find the perimeter and area of each figure. Each figure is in inches (in). Not to scale.

Answers



1. _____



2. _____

3. _____

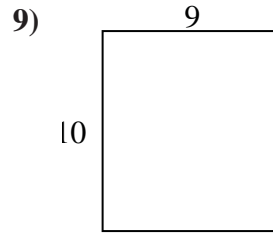
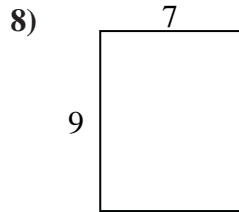
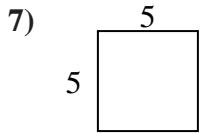
4. _____

5. _____

6. _____

7. _____

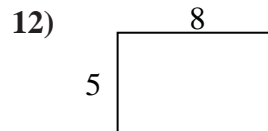
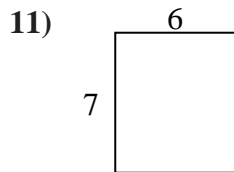
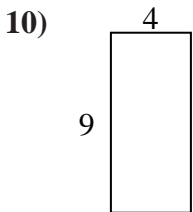
8. _____



9. _____

10. _____

11. _____



12. _____

13. _____

14. _____

15. _____

