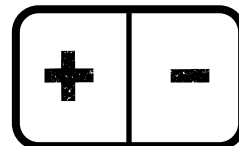


# Word Problems

Circle the numbers. Underline the key words.

Choose and color:




Carlos ate 4 cookies on Monday. He ate 8 cookies on Tuesday. How many more cookies did he eat on Tuesday?



|         |  |  |  |  |  |  |  |  |  |
|---------|--|--|--|--|--|--|--|--|--|
| Monday  |  |  |  |  |  |  |  |  |  |
| Tuesday |  |  |  |  |  |  |  |  |  |

Write the  
Equation

|  |   |
|--|---|
|  | Carlos ate <input style="width: 40px; height: 30px;" type="text"/> more cookies on Tuesday. |
|--|---|



# Word Problems

Circle the numbers. Underline the key words.

9 green frogs hopped onto a lily pad.

4 red frogs hopped on, too.

How many more green frogs than red frogs?

Choose and color:


|   |   |
|---|---|
| + | - |
|---|---|

green frogs

|  |  |  |  |  |  |  |  |  |  |
|--|--|--|--|--|--|--|--|--|--|
|  |  |  |  |  |  |  |  |  |  |
|--|--|--|--|--|--|--|--|--|--|

red frogs

|  |  |  |  |  |  |  |  |  |  |
|--|--|--|--|--|--|--|--|--|--|
|  |  |  |  |  |  |  |  |  |  |
|--|--|--|--|--|--|--|--|--|--|




Write the  
Equation

|  |
|--|
|  |
|--|

There are

|  |
|--|
|  |
|--|

more green frogs.



# Word Problems

Name: \_\_\_\_\_

Read it.

Draw it.

Tom has 3 bugs.  
Anna has 6 bugs.


How many many  
more bugs does  
Anna have?

Anna has  more bugs than Tom.


Choose and color:

+

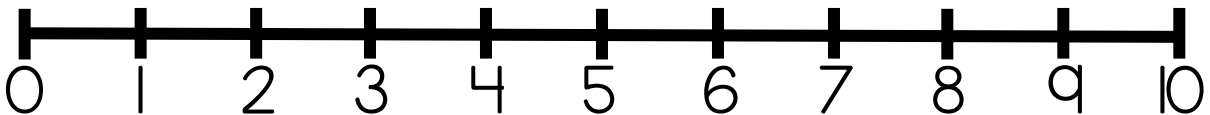
-



Circle the numbers.     Underline the key words.



Use a number line.



Write the  
Equation

$$3 + \square = 6$$

Anna has  more bugs.