


(Suggested points)

NAME: Key

GRADE 2: Unit 3 Pre-Test

What time does the clock read?

2.MD.7



- 1pt  
1) 3:25  
1pt  
2) 5:15  
1pt  
3) 4:15

Yes

☒ No

☒ Yes

No

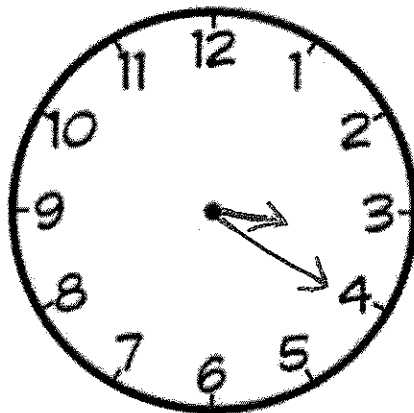
Yes

☒ No

- 4) Draw the hour and minute hands to show 3:20.

2.MD.7

1pt




5) Draw a minute hand on the clock.

2.MD.7

Tell what time the clock reads. (Answers vary)

1pt



Does the group of coins total 26 cents?

2.MD.8

6)



Yes

No

1pt

7)



Yes

No

1pt

8)



Yes

No

1pt

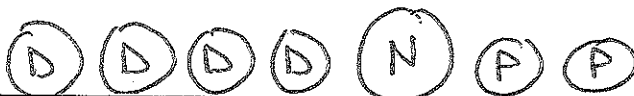
9)

Using coins, show one way to make 47 cents. (ans. vary)

2.MD.8

1pt

(Ex)



- 10) Dad cleaned out the car and found a quarter, three dimes, two nickels, and one penny.

2pt

Did he find more than a dollar? NO

2.MD.8

Prove it by using pictures, numbers, or words.

$$\textcircled{Q} + \textcircled{D} \textcircled{D} \textcircled{D} + \textcircled{N} \textcircled{N} + \textcircled{P} \\ 25¢ + 10¢ + 10¢ + 10¢ + 5¢ + 5¢ + 1¢ = 67¢$$

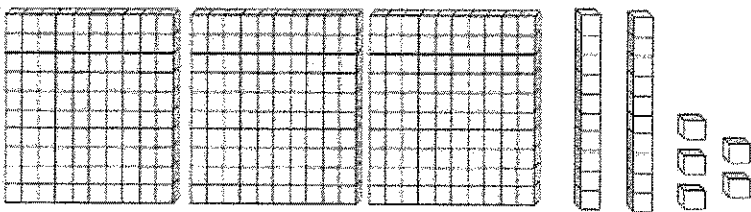
He found 67¢ which is less than \$1.

Write the number that the model shows.

2.NBT.2

11)

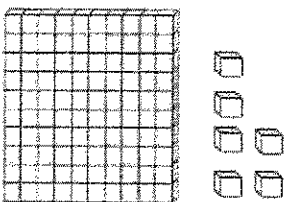
1pt



325

12)

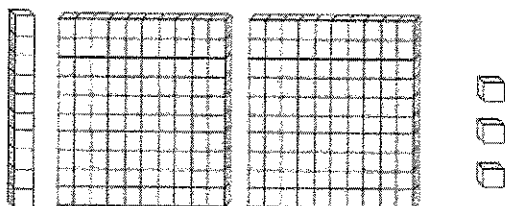
1pt



106

13)

1pt




213

- 14) Draw base ten blocks to represent the number 230. (varies)

2.NBT.1

1pt

(Ex.)

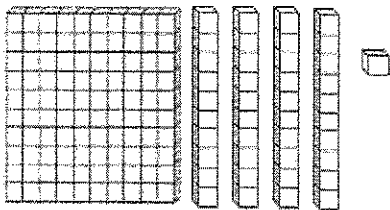


- 15) Chloe and Zein were asked to represent 141 using base ten blocks.

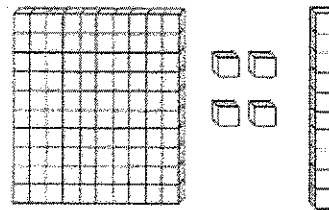
2.NBT.1

3pt

Chloe:



Zein:



Which student is correct? Chloe

Explain the mistake made by the other student.

Zein used unit cubes to represent ten  
and his long to represent one.  
There should be 4 longs and 1 unit  
cube.