


NAME: _____

GRADE 2: Unit 3 Pre-Test

What time does the clock read?

2.MD.7



1) 3:25

Yes

No

2) 5:15

Yes

No


3) 4:15

Yes

No

4) Draw the hour and minute hands to show 3:20.


2.MD.7



- 5) Draw a minute hand on the clock.

2.MD.7

Tell what time the clock reads. _____



Does the group of coins total 26 cents?

2.MD.8

- 6) (D) (D) (N) (P)

Yes

No

- 7) (D) (D) (N) (N) (N)

Yes

No

- 8) (D) (N) (N) (N) (P)

Yes

No

- 9) Using coins, show one way to make 47 cents.

2.MD.8

- 10) Dad cleaned out the car and found a quarter, three dimes, two nickels, and one penny.

Did he find more than a dollar? _____

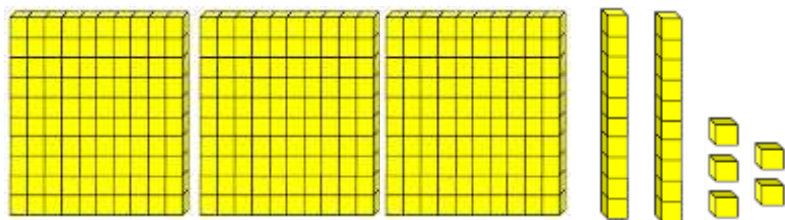
2.MD.8

Prove it by using pictures, numbers, or words.

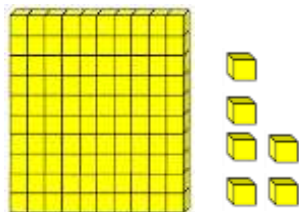
Write the number that the model shows.

2.NBT.2

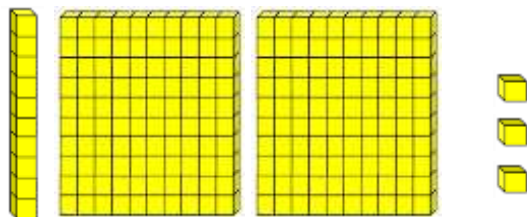
11)



12)




13)



- 14) Draw base ten blocks to represent the number 230.

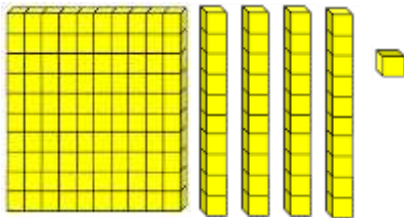
2.NBT.1



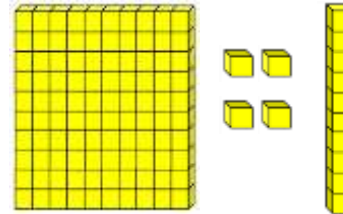
- 15) Chloe and Zein were asked to represent 141 using base ten blocks.

2.NBT.1

Chloe:



Zein:



Which student is correct? _____

Explain the mistake made by the other student.
