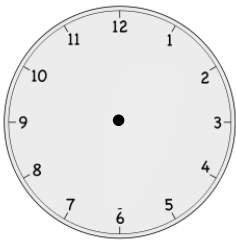



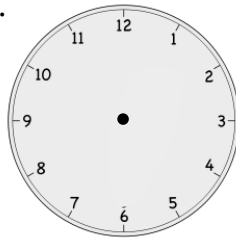


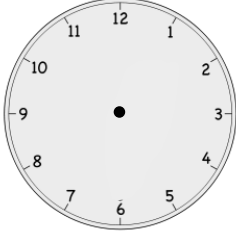

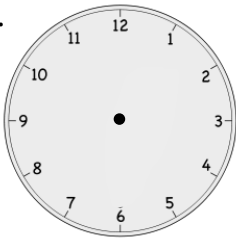


Name \_\_\_\_\_

Date \_\_\_\_\_

Write the time shown on the clock, or draw the missing hand(s) on the clock.

1.  10 o'clock	2.  half past 10 o'clock
3.  8 o'clock	4.  _____
5.  3 o'clock	6.  half past 3 o'clock
7.  _____	8.  half past 6 o'clock
9.  half past 9 o'clock	10.  4 o'clock

11. Match the pictures with the clocks.

a.



Soccer practice

3:30

b.



Brush teeth

7:30

c.



Wash dishes

6:00

d.



Eat dinner

5:30

e.



Take bus home

4:30

f.



Homework

half past 6 o'clock

