


Name _____

Date _____

1. Match each clock to the time it shows.

a.



4 o'clock



b.



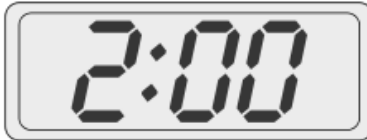
7 o'clock



c.



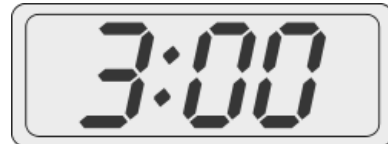
11 o'clock



d.



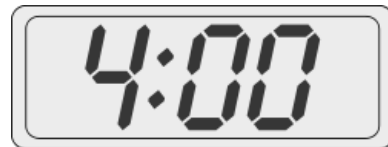
10 o'clock



e.



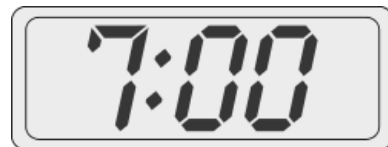
3 o'clock



f.




2 o'clock



2. Put the hour hand on the clock so that the clock matches the time. Then, write the time on the line.

a.



6 o'clock


6 : 00

b.




9 o'clock

c.




12 o'clock

d.



7 o'clock

e.



1 o'clock