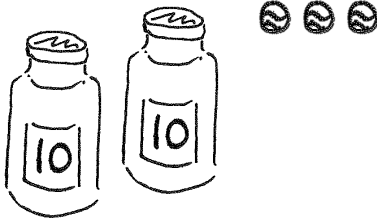


Name _____

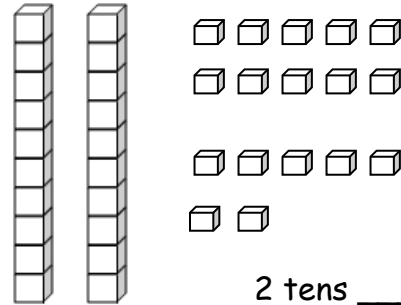
Date _____

1. Fill in the blanks, and match the pairs that show the same amount.

a.

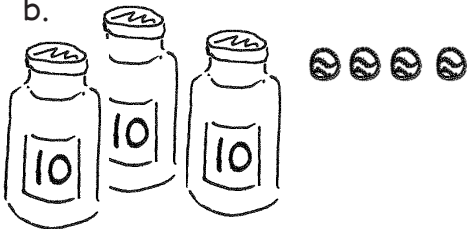


_____ tens _____ ones

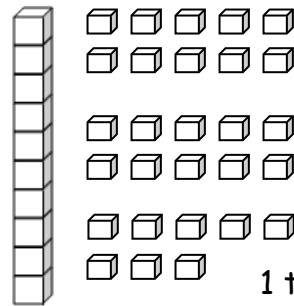


2 tens _____ ones

b.

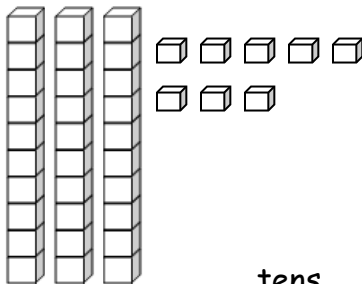


_____ tens _____ ones

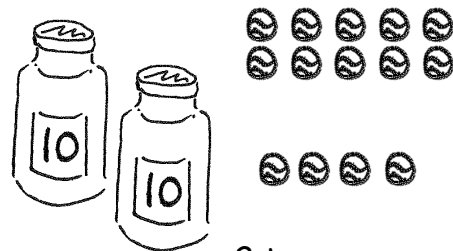


1 ten _____ ones

c.

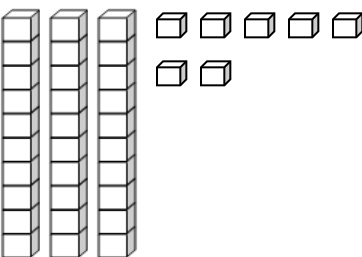


_____ tens _____ ones




2 tens _____ ones

d.



_____ tens _____ ones



1 ten _____ ones

2. Match the place value charts that show the same amount.

a.

tens	ones
2	18

tens	ones
3	8

b.

tens	ones
1	16

tens	ones
2	1

c.

tens	ones
0	21

tens	ones
2	6

3. Check each sentence that is true.

☐ a. 35 is the same as 1 ten 25 ones.

☐ b. 28 is the same as 1 ten 18 ones.

☐ c. 36 is the same as 2 tens 16 ones.

☐ d. 39 is the same as 2 tens 29 ones.

4. Emi says that 37 is the same as 1 ten 27 ones, and Ben says that 37 is the same as 2 tens 7 ones. Draw quick tens to show if Emi or Ben is correct.