

Name: \_\_\_\_\_ Hour: \_\_\_\_\_ Date: \_\_\_\_\_

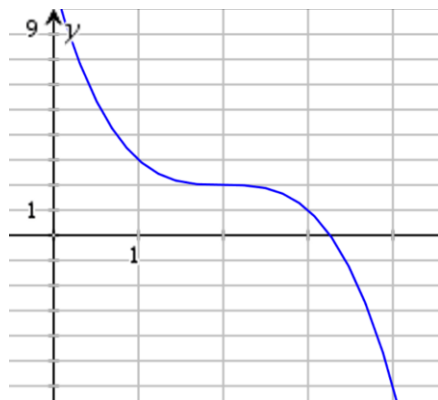
## Writing Equations of Graphs with Dilations Practice II

Find the equation of each of the following graphs. (Remember these have dilations!) After finding the equation describe *all* of the transformations that have taken place from the parent function. **Show all work!**

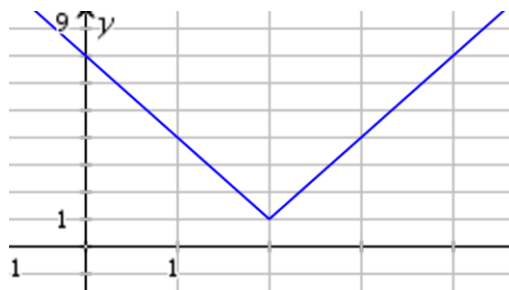
1)



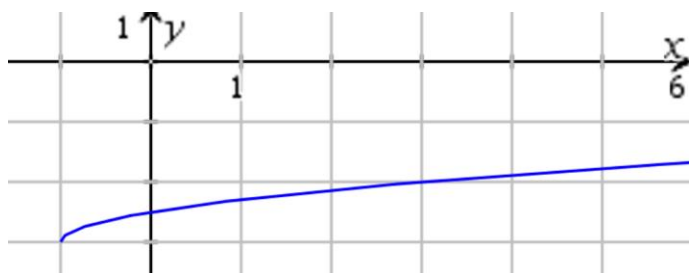
2)



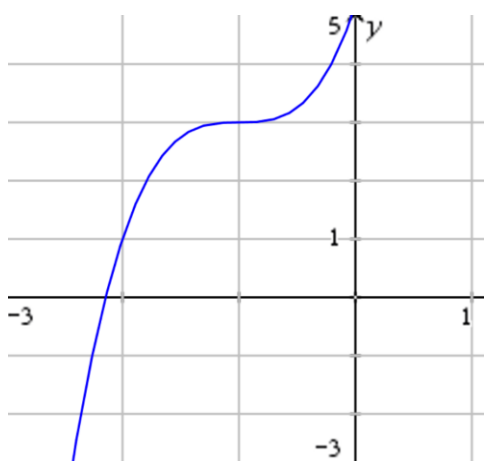
3)



4)



5)



6)

