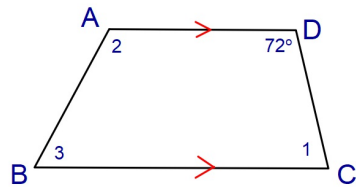
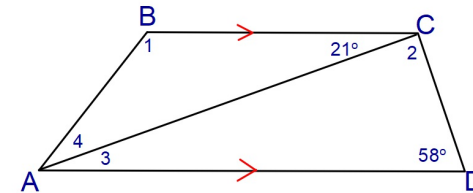


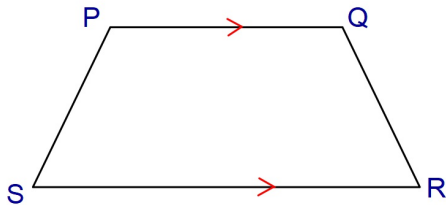
Find the measure of the missing angles of this isosceles trapezoid.



Find the measure of the missing angles of this isosceles trapezoid.



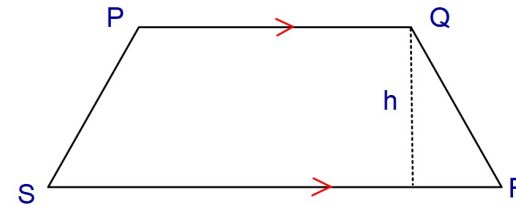
Find the lengths of each diagonal in this Isosceles Trapezoid



$$PR = 3x + 4$$

$$QS = 6x - 23$$

Find the lengths of each leg in this Isosceles Trapezoid



Given:

$$PQ = 44$$

$$RS = 60$$

$$\text{height of trapezoid} = 15$$