


BELLWORK: Geometry Thursday, January, 23, 2020

How many rectangles of any size or shape are in the figure below?
A question to ask yourself before beginning: Are all squares rectangles?




ANSWER

How many rectangles of any size or shape are in the figure below?

A question to ask yourself before beginning: Are all squares rectangles?

Yes, a square
is a rectangle




overall shape = 1


 = 2


 = 2

 = 2


 = 1

 = 1

 = 2

 = 1

 = 4

 = 2

18