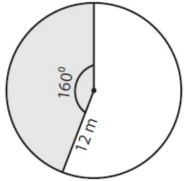


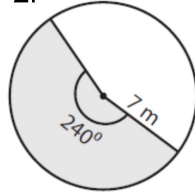
Bellwork Friday, June 6, 2014

Find the area of each shaded sector to the nearest hundredth.

1.

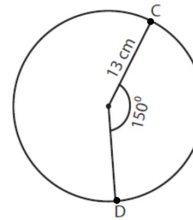


2.

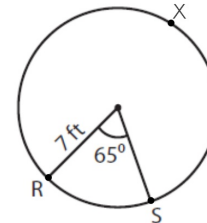


Find the length of each arc to the nearest hundredth.

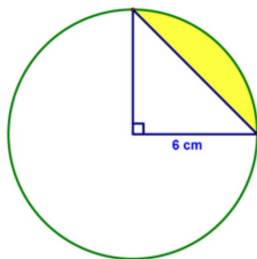
3.  $\widehat{CD}$



4.  $\widehat{RXS}$



5. Find the area of the shaded region to the nearest tenth.



6. Find the area of the shaded region to the nearest tenth. The area of the square is  $144\text{ in}^2$ .

