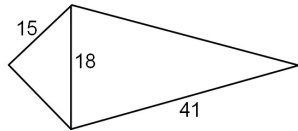


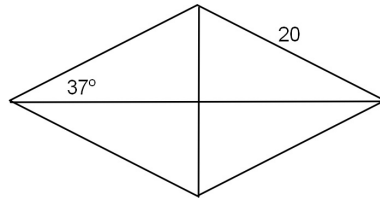
Bellwork Tuesday, June 10, 2014

Find the area of each to the nearest tenth unless noted otherwise.

1. Kite

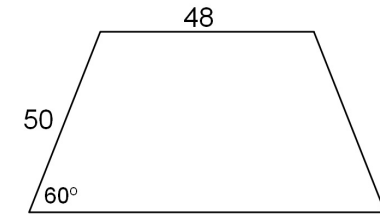


2. Rhombus



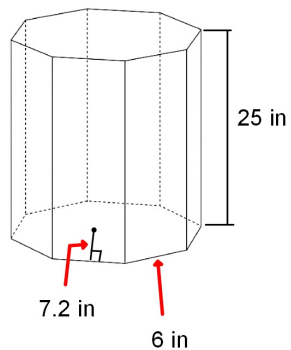
3. A regular 30-gon has sides with a length of 18 cm.

4. Isosceles Trapezoid. Find the EXACT area.

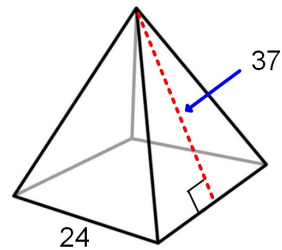


Find the surface area and volume of each.

5. Octagonal Prism.

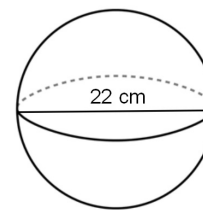


6. Square Pyramid.



Find the surface area and volume of each.

7. Give your answer in terms of π .



8. Give your answer in terms of π .

