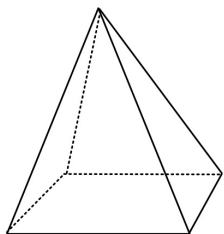
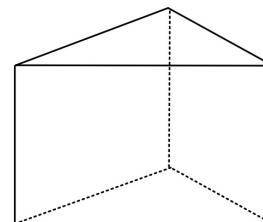


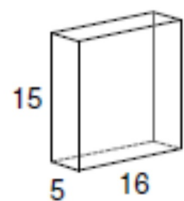
Draw a net for this Square Pyramid.



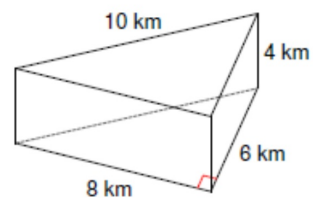
Draw a net for this Triangular Prism.



Find the Surface Area.



Find the Surface Area.



Find the Surface Area.

