

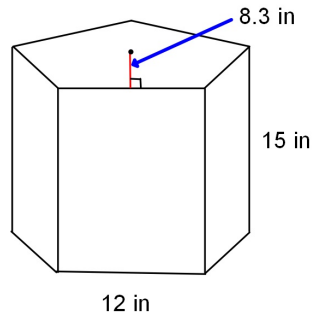
Bellwork Friday, May 30, 2014

Find the Surface Area and Volume of each. Round to the nearest tenth unless noted otherwise.

1. Pentagonal Prism.

SA =

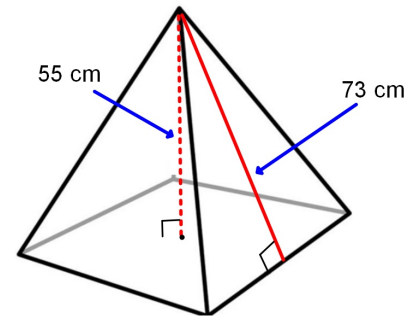
Vol =



2. Square Pyramid.

SA =

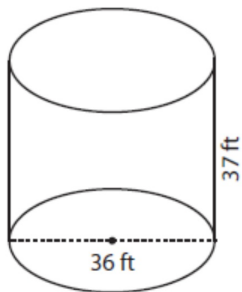
Vol =



3. Cylinder. Give answer in terms of  $\pi$

SA =

Vol =



4. Cone. Give answer to the nearest tenth.

SA =

Vol =

