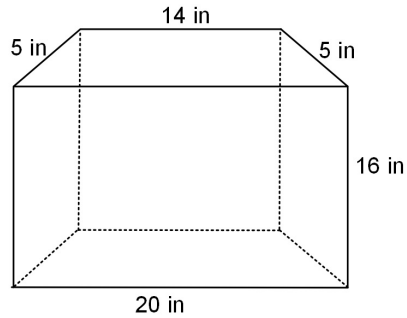
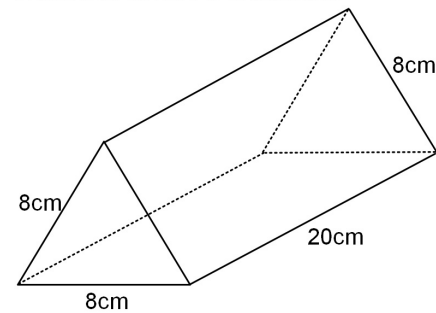


Bellwork, Thursday, May 22, 2014

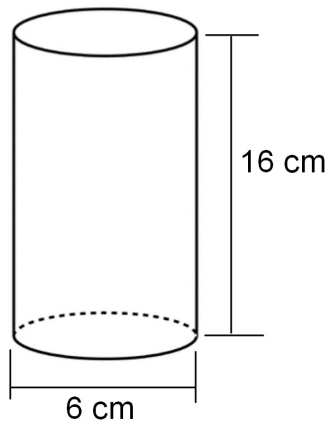
1. Find the Surface Area of this Trapezoidal Prism. Round to the nearest tenth if needed.



2. Find the area of this Triangular Prism. Round to the nearest tenth if needed.



3. Find the Surface Area of this Cylinder. Leave your answer in terms of π .



4. Find the Surface Area of this Cylinder. Round your answer to the nearest hundredth.

