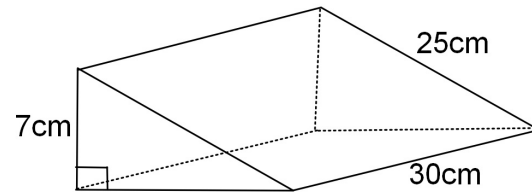


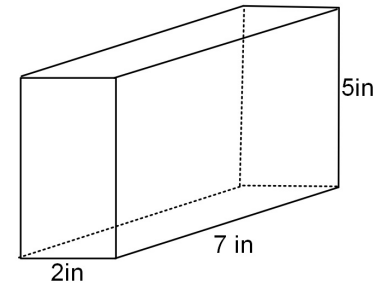
Bellwork, Tuesday, May 20, 2014

Find the Surface Area of each Prism. Round to the nearest hundredth when necessary.

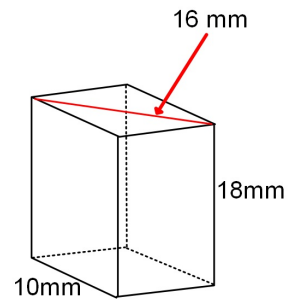
1. Right Triangular Prism



2. Rectangular Prism.



3. Rhomboidal Prism.



4. Bases are Regular Decagons whose sides are 14 inches long. The height of the prism is 9 inches.