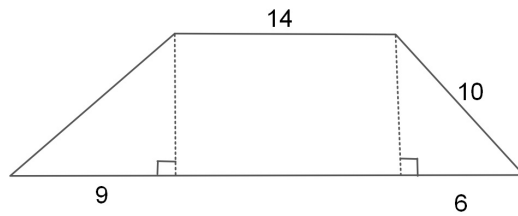


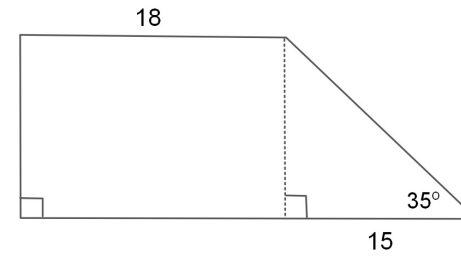
Bellwork Friday, May 2, 2014

For 1 and 2, find the area of each Trapezoid. Round to the nearest hundredth where necessary.

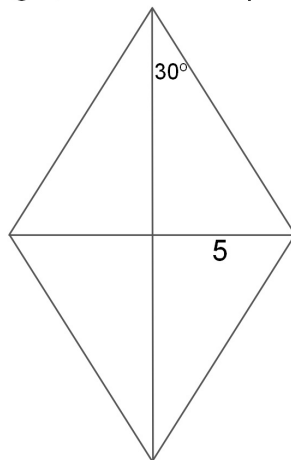
1.



2.



3. Find the area of this Rhombus. If the answer is not an integer, leave it in simplest radical form.



4. Find the area of this Rhombus.

