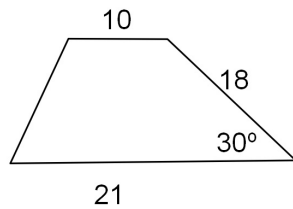


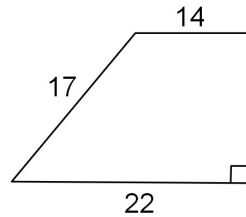
Bellwork, Monday, May 19, 2014

Find the height of each figure.

1. Trapezoid.

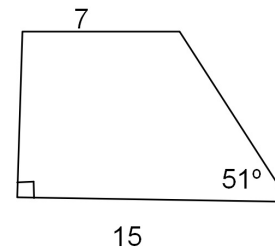


2. Trapezoid.

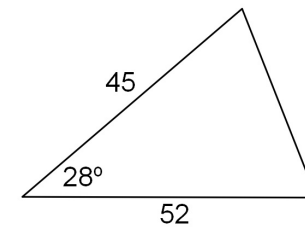


Find the height of each figure.

3. Trapezoid.

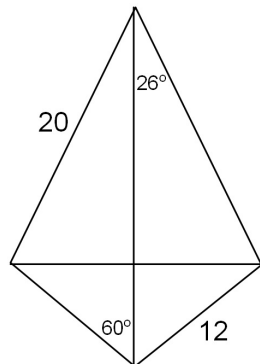


4. Triangle.



Find the length of both diagonals in each figure.

5. Kite



6. Rhombus

