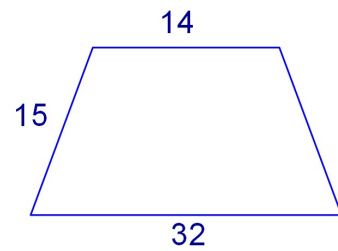
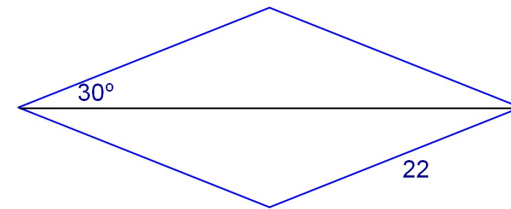


Bellwork Tuesday, May 13, 2014

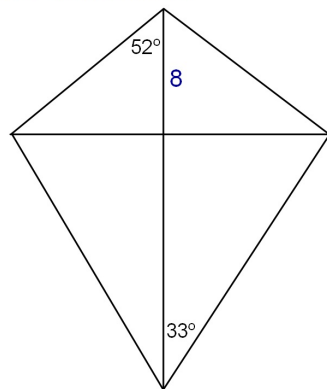
1. Find the area of this trapezoid.



2. Find the exact area of this Rhombus



3. Find the area of this kite to the nearest tenth.



4. Find the area of this square.

