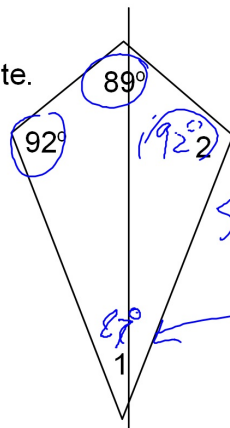
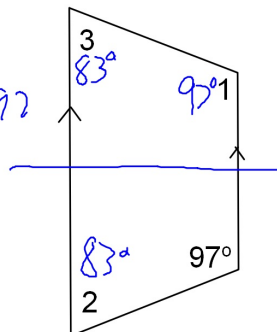


Find the measure of as many angles in each figure as possible.

1. Kite.

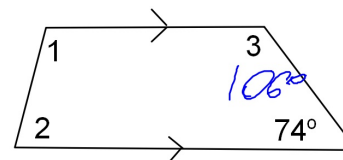


2. Isosceles Trapezoid.

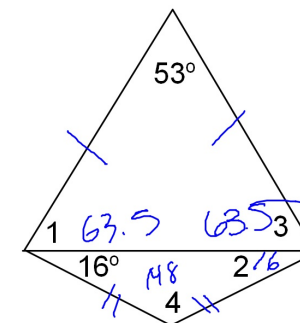


$$560 - 89 - 92 - 92$$

3. Trapezoid.



4. Kite.



5. Kite.

