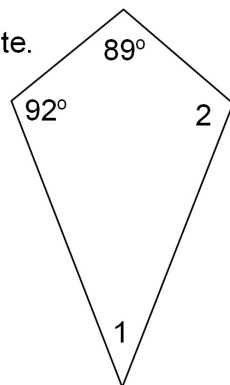
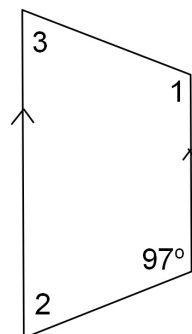


Find the measure of as many angles in each figure as possible.

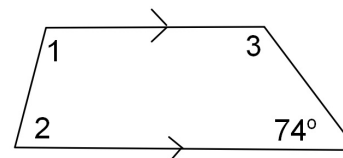
1. Kite.



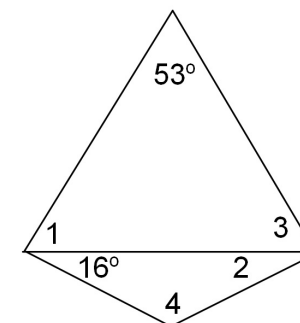
2. Isosceles Trapezoid.



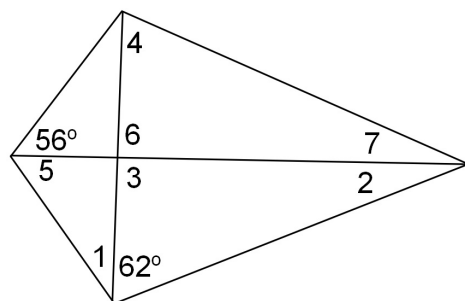
3. Trapezoid.



4. Kite.



5. Kite.



6. Kite.

