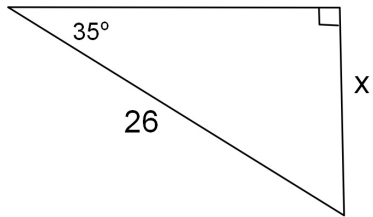


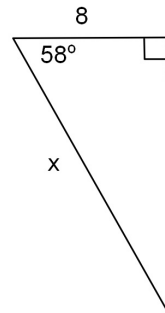
Bellwork Thursday, March 20, 2014

Find the value of  $x$  to the nearest hundredth.

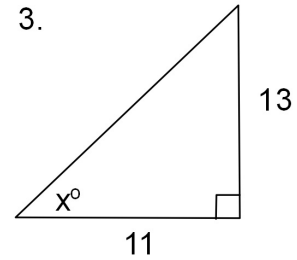
1.



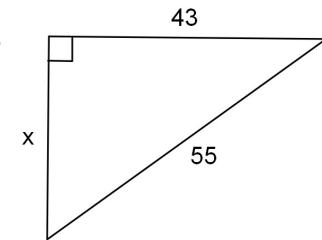
2.



3.

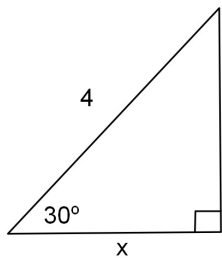


4.

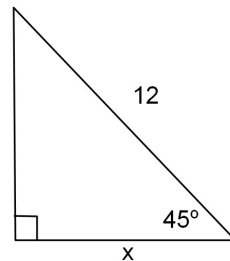


Find the exact value of each missing side.

5.



6.



Find the exact value of the missing side.

7.

