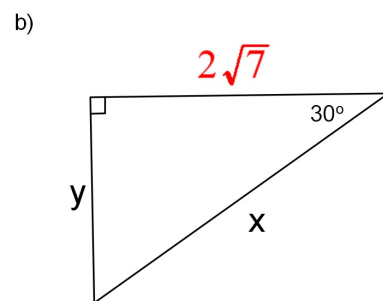
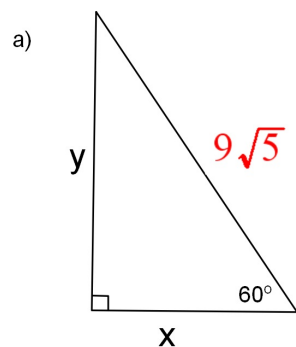
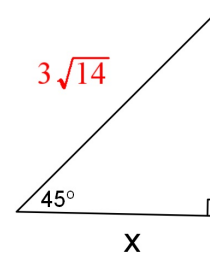


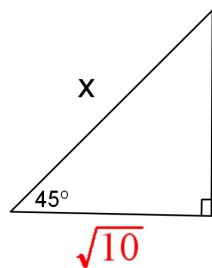
1. Find the value of  $x$  and  $y$ .



2. Find the value of  $x$ .



3. Find the value of  $x$ .



4. Find each as a ratio.

a)  $\tan A$

b)  $\tan B$

