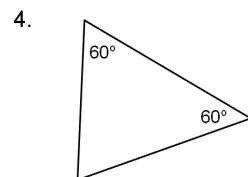
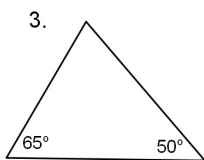
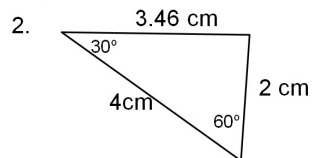
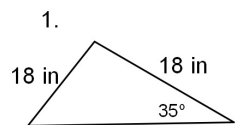
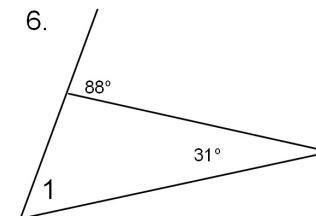
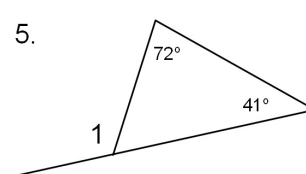


Geometry Bellwork Friday, November 22, 2013

Name each triangle by its sides and its angles.

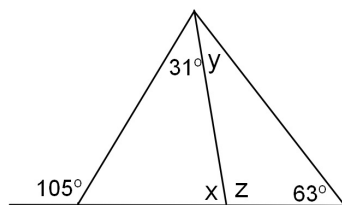


Find the measure of angle 1 in each diagram.



The measure of an exterior angle of a triangle is equal to the sum of the remote interior angles.

7. Find the value of x , y and z .



8. Find the value of each variable.

