

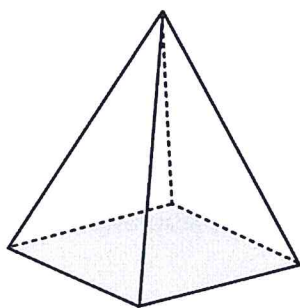
Bellwork Hon Alg 2 Wednesday, February 1, 2017

A net is a flat pattern that can be folded up to make a 3-Dimensional object.

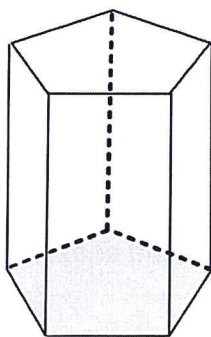
1. Draw as many nets for a cube as you can.

Draw a net for each of the figures shown.

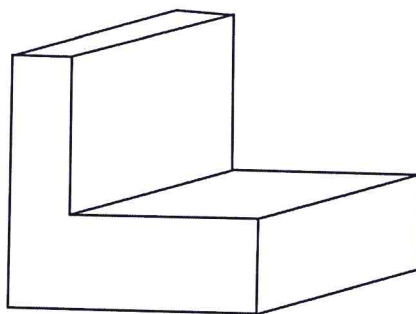
2. Square Pyramid



3. Pentagonal Prism



4. This figure.



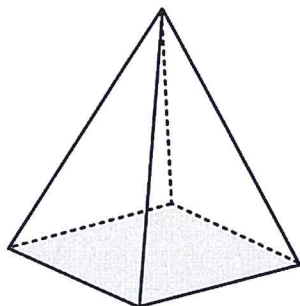
Bellwork Hon Alg 2 Wednesday, February 1, 2017

A net is a flat pattern that can be folded up to make a 3-Dimensional object.

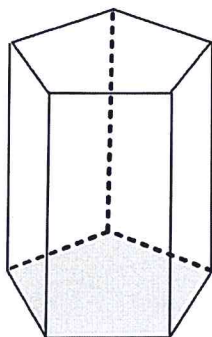
1. Draw as many nets for a cube as you can.

Draw a net for each of the figures shown.

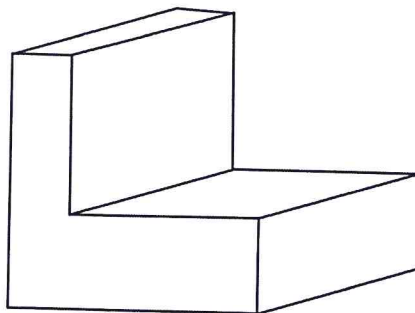
2. Square Pyramid



3. Pentagonal Prism



4. This figure.


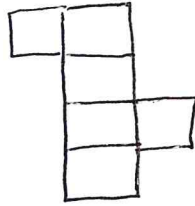



Answers

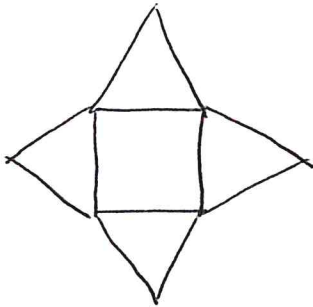
Hon Alg 2 Bellwork

2-1-17

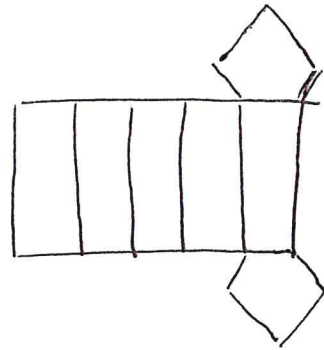
- ① There are 11 nets for a cube, below are a few of them



- ② sq. pyramid
one possible answer:



- ③ Pentagonal Prism
one possible answer



- ④ one possible answer

