




Use the graphs below for Problems 10, 16, 17, 24-26. Use the rest of the paper for the remaining questions.

10.

16. List inequalities below
then graph them.17. List inequalities below
then graph them.

24.

25.

26.

