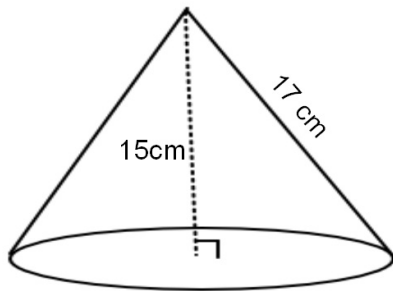


The volume for any Cone or Pyramid is found by using the following formula:

$$V = \frac{1}{3} Bh$$

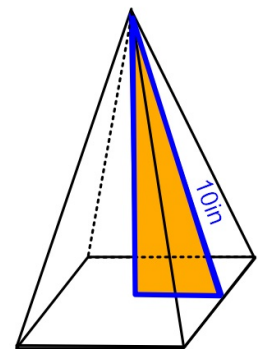
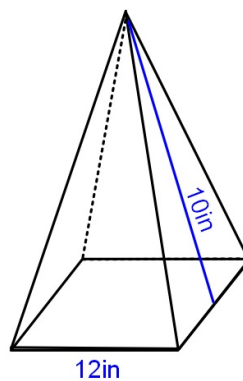
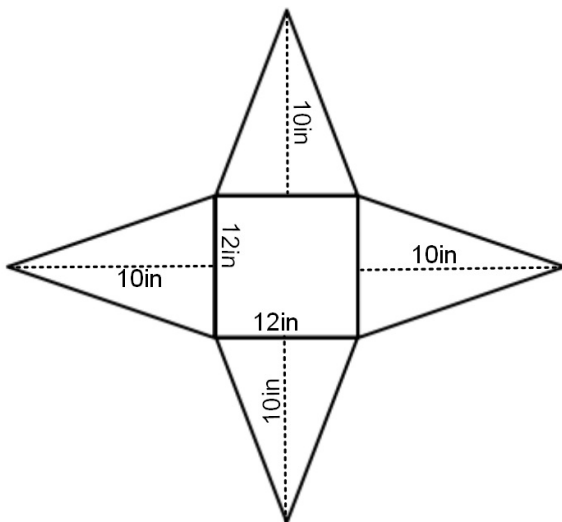
where B = area of the base

1. Find the volume of this cone. Leave your answer in terms of π .



V =

2. Sketch the 3D solid that can be made from this net then find its volume.



V =