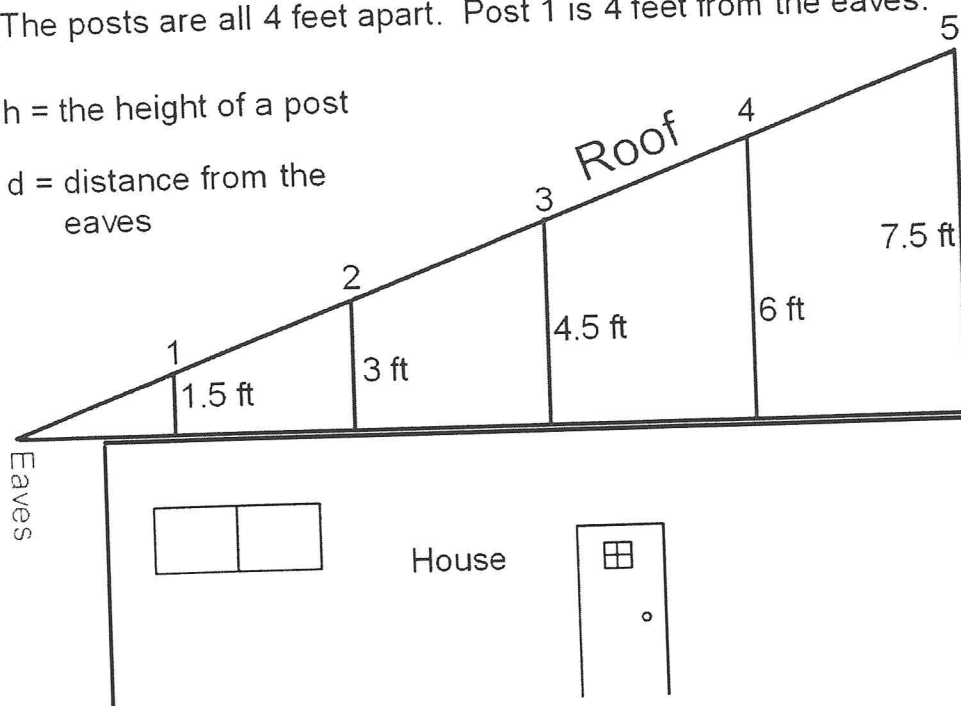


The posts are all 4 feet apart. Post 1 is 4 feet from the eaves.

$h$  = the height of a post


$d$  = distance from the eaves



ALG 1 CH 5 NOTES  
FALL 2014

Find the ratio  $\frac{h}{d}$  for each post.

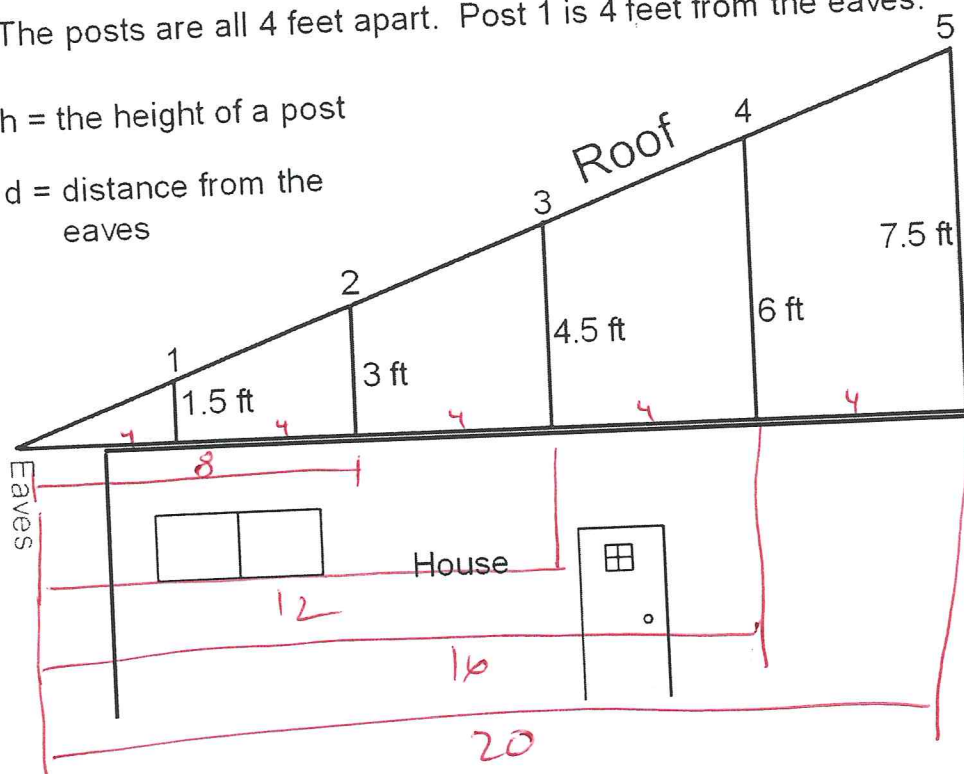
POST	$h$	$d$	$\frac{h}{d}$
1	1.5		
2	3		
3	4.5		
4	6		
5	7.5		



The posts are all 4 feet apart. Post 1 is 4 feet from the eaves.

$h$  = the height of a post

$d$  = distance from the eaves



ALG 1 CH 5 NOTES  
FALL 2014

Find the ratio  $\frac{h}{d}$  for each post.

POST	$h$	$d$	$\frac{h}{d}$
1	1.5	4	0.375
2	3	8	0.375
3	4.5	12	0.375
4	6	16	0.375
5	7.5	20	0.375

