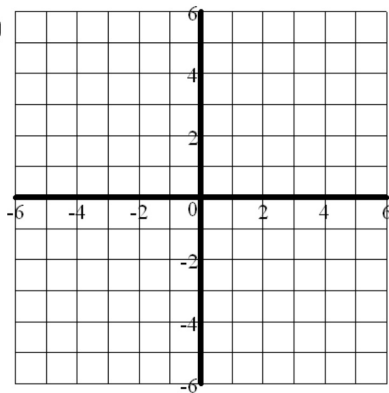
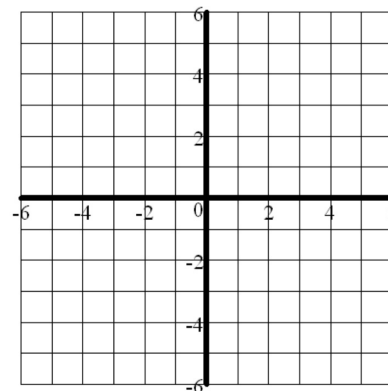


Graph each line with at least 3 points.

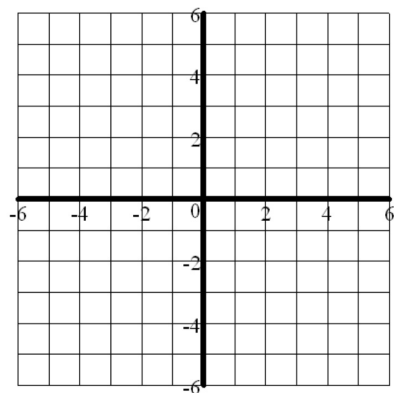
1. $y - 2 = -3(x - 1)$



2. $y + 1 = \frac{2}{3}(x + 4)$



3. $30x + 15y = 60$



4. $8x - 12y = 24$

