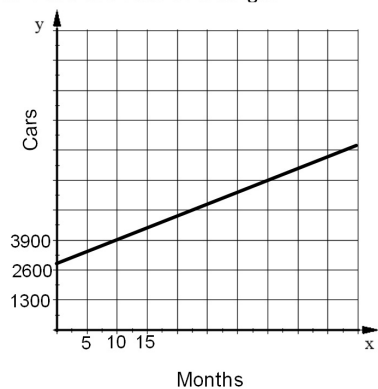


1. Find the rate of change.



2. Write the equation of the line that passes through each pair of points in both Point-Slope and Slope-Intercept Forms.

$(-6, -7)$ and $(12, -1)$

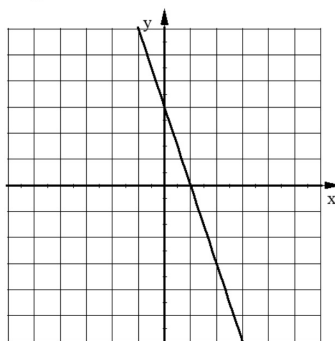
3. Write the equation of the line that passes through each pair of points

a) $(-5, 9)$ and $(-5, 2)$

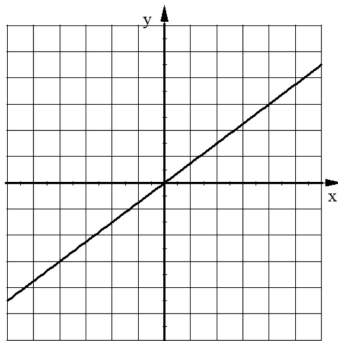
b) $(-3, 1)$ and $(1, 1)$

For 4 to 7 write the equation of each line.

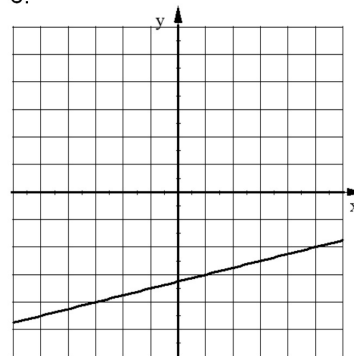
4.



5.



6.



7.

