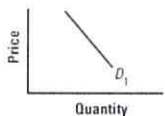
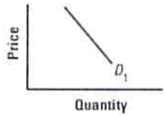
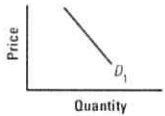
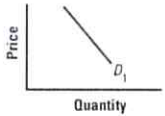
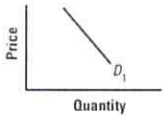
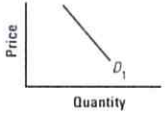



## Analyzing Demand and Supply Headlines

For each demand headline you analyze, do the following: (1) Record the headline in the correct row. (2) Draw what will likely happen to the demand curve based on the headline. (3) Explain your graph. Cite and underline the demand shifter in your explanation. Or explain why the curve did not shift and whether the quantity demanded increased or decreased.

Headline	Demand Curve for	Explanation
A	<b>Movie Tickets</b> 	
B	<b>Disco CDs</b> 	
C	<b>Burgers</b> 	
D	<b>Video Games</b> 	
E	<b>Sport Utility Vehicles</b> 	
F	<b>Fresh Strawberries</b> 	
G	<b>Strollers</b> 	
H	<b>Laptops</b> 