


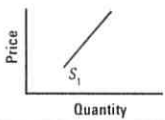





For each supply headline you analyze, do the following: (1) Record the headline in the correct row. (2) Draw what will likely happen to the supply curve based on the headline. (3) Explain your graph. Cite and underline the supply shifter in your explanation. Or explain why the curve did not shift and whether the quantity supplied increased or decreased.

Headline	Supply Curve for	Explanation
I	<b>Frozen Peach Pies</b> 	
J	<b>Minivans</b> 	
K	<b>Sneakers</b> 	
L	<b>Gasoline</b> 	
M	<b>Cars</b> 	
N	<b>Sugar</b> 	
O	<b>Oregon Lumber</b> 	
P	<b>Solar Energy Panels</b> 