

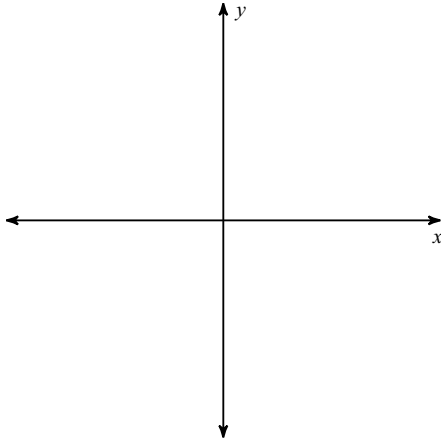
Reference Triangles 30-60-90

Date: _____ Hour: _____

Draw the reference triangles and name what quadrant it is located.1) 150°

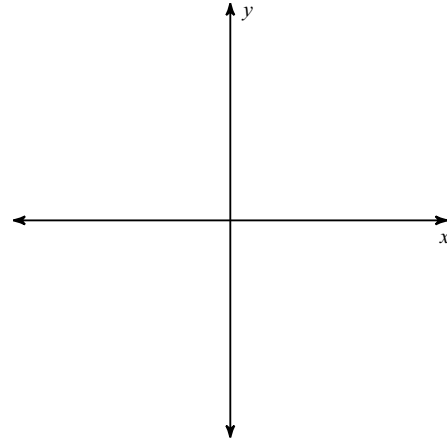
Quadrant:

RA:

2) 240°

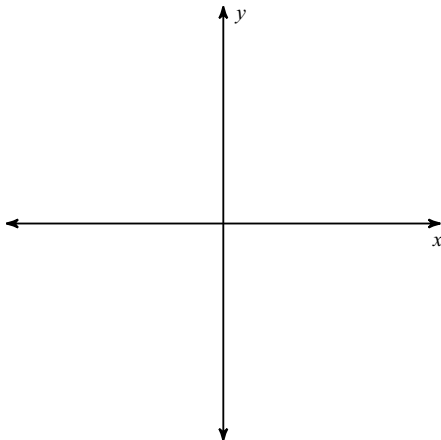
Quadrant:

RA:

3) 330°

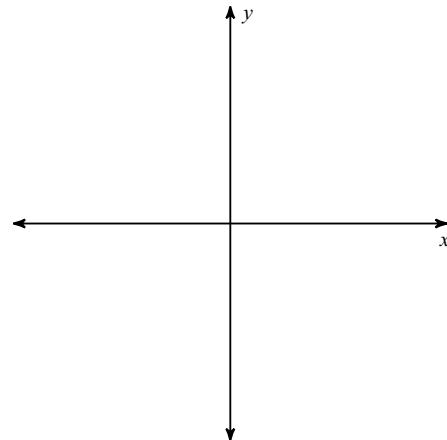
Quadrant:

RA:

4) 120°

Quadrant:

RA:



Answers to Reference Triangles 30-60-90

1) Quadrant: II
RA: 30°

2) Quadrant: III
RA: 60°

3) Quadrant: IV
RA: 30°

4) Quadrant: II
RA: 60°