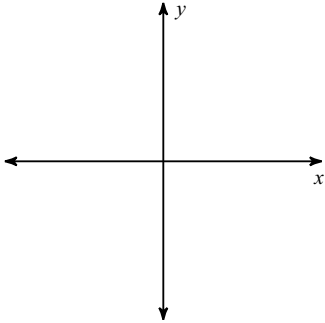


Coterminal Angles

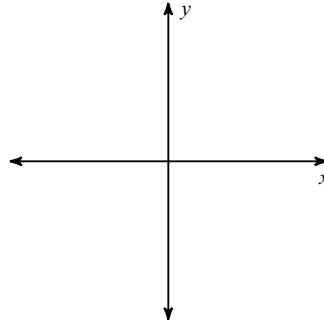
Date: _____ Hour: _____

Draw an angle with the given measure in standard position.

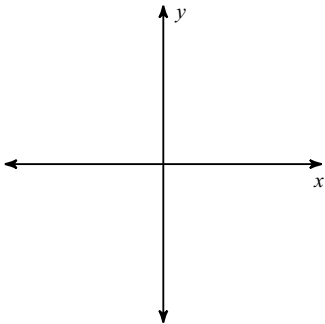
1) -190°



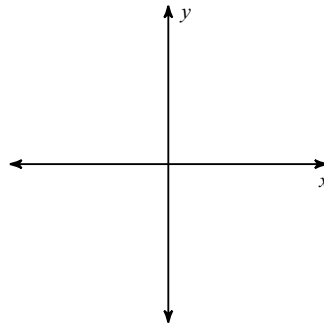
2) 215°



3) 260°



4) -100°

**Find a positive and a negative coterminal angle for each given angle.**

5) 115°

6) 190°

7) 195°

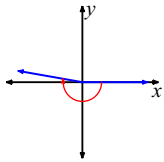
8) 185°

9) 70°

10) -105°

Answers to Coterminal Angles

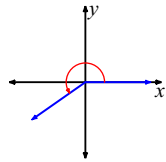
1)



5) 475° and -245°

9) 430° and -290°

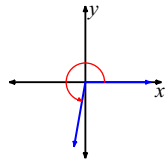
2)



6) 550° and -170°

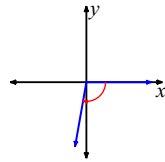
10) 255° and -465°

3)



7) 555° and -165°

4)



8) 545° and -175°