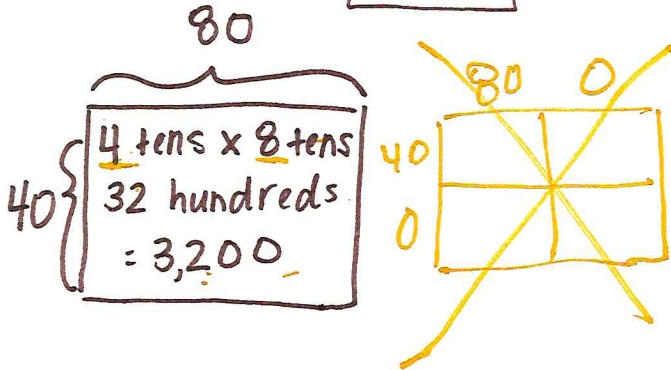


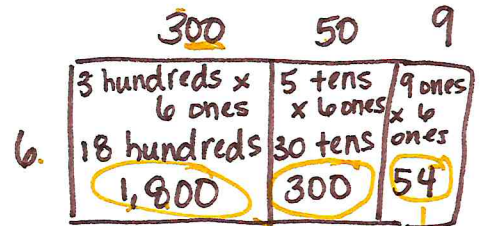
Mid Module 3 Review

1. Draw an area model to solve the following.

a. $40 \times 80 = 3,200$



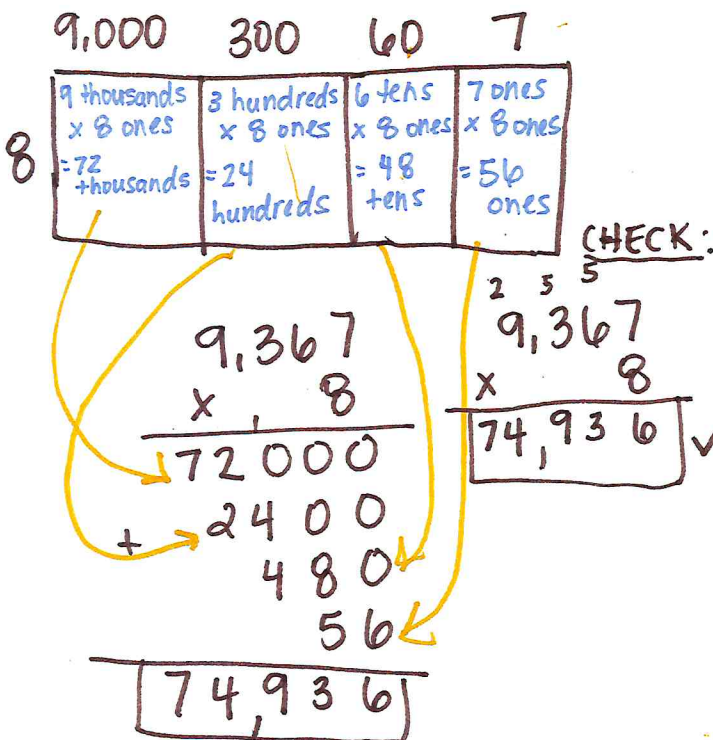
b. 6×359



$$\begin{array}{r} 359 \\ \times 6 \\ \hline 2,154 \end{array}$$

2. Use any algorithm to multiply. Check your work with a different algorithm.

a. $8 \times 9,367$



b. $5,871 \times 4$

