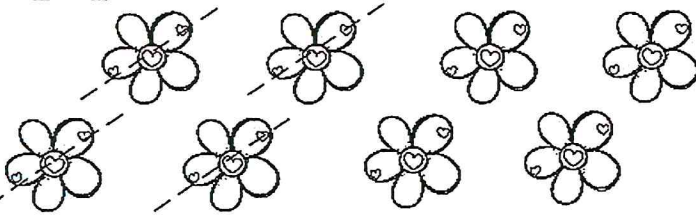


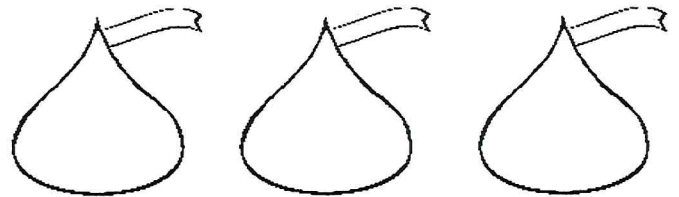
Name _____

Lots of Love Subtraction


Directions: Count the items. Use the pictures to complete the equation. Color the pictures..




$$8 - 4 = \underline{\quad}$$




$$3 - 1 = \underline{\quad}$$




$$6 - 4 = \underline{\quad}$$




$$9 - 3 = \underline{\quad}$$




$$5 - 2 = \underline{\quad}$$



$$10 - 5 = \underline{\quad}$$



$$4 - 3 = \underline{\quad}$$



$$7 - 4 = \underline{\quad}$$