

My Spelling Words

1. lunch

2. much

3. thump

4. truck

5. bug

6. under

7. human

8. music

9. refuse

10. accuse

Academic vocab →

Spelling Homework Week

Name _____

Date _____

Choose at least 3 spelling activities to complete this week. The activities must make a tic-tac-toe line: horizontal, vertical, or diagonal three-in-a-row. Have a grown-up initial next to the activities you complete. You may substitute these activities with your own if you wish. Staple any additional papers to the back. This is due 10-13.

<p>Use graph paper or go to www.puzzlemaker.com to create a word search using all of your spelling words. Find the hidden words.</p> <p>_____ initial</p>	<p>Write your words in reverse alphabetical order (from Z-A).</p> <p>_____ initial</p>	<p>Write your words and cross out the silent letters.</p> <p>_____ initial</p>
<p>Write your spelling words with dots in pencil. Then use a marker or crayon to connect the dots.</p> <p>sad had mad</p> <p>_____ initial</p>	<p>Write the spelling words, leaving blank spaces for all vowel letters.</p> <p>bl__ck = black l__st = list</p> <p>_____ initial</p>	<p>Write your spelling words and illustrate them.</p> <p>_____ initial</p>
<p>Read all your spelling words 3 times. See how many you can write from memory. Repeat until all words are memorized.</p> <p>_____ initial</p>	<p>Write each word once. See how many small words you can find within each spelling word.</p> <p>_____ initial</p>	<p>Write a letter to your friend using all of your spelling words.</p> <p>_____ initial</p>

Due: Monday 10/16

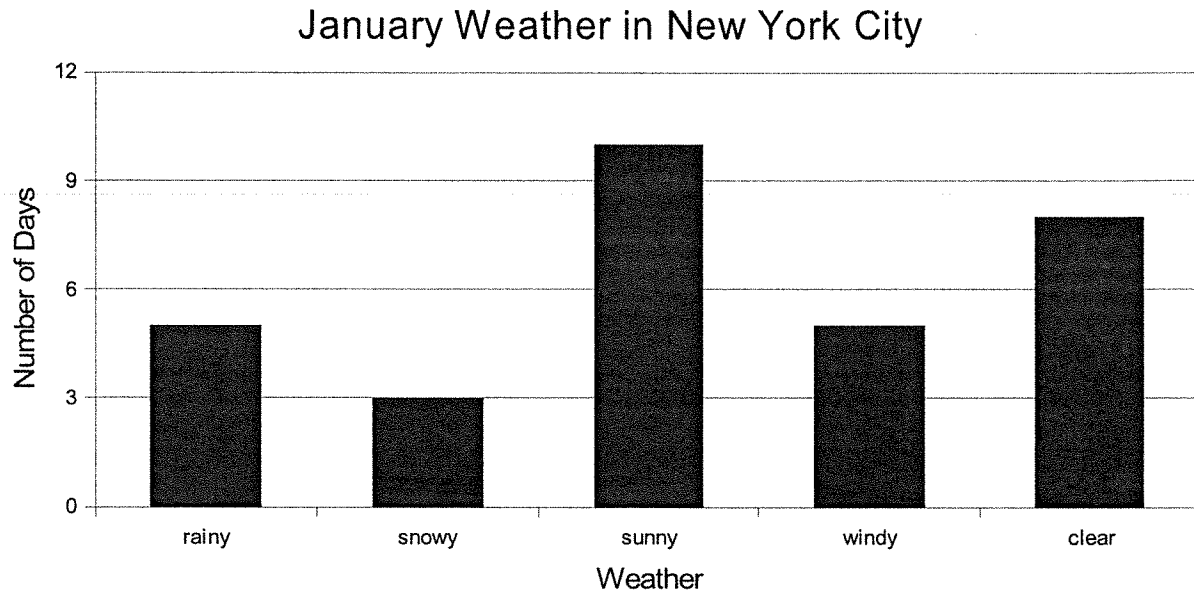
Weekly Reading Log

Date	Book Title	Minutes	Quick Check	Parent Initials												
Monday			Two new and interesting words: 1. _____ 2. _____													
Tuesday			Write 1 question you have before, during or after reading.													
Wednesday			<table><tr><th colspan="2">Setting</th></tr><tr><td><u>Time</u></td><td><u>Place</u></td></tr><tr><td></td><td></td></tr></table>	Setting		<u>Time</u>	<u>Place</u>									
Setting																
<u>Time</u>	<u>Place</u>															
Thursday			<table><tr><th colspan="4">Parts of Speech {1 word for each}</th></tr><tr><td>Noun</td><td>Proper Noun</td><td>Adjective</td><td>Verb</td></tr><tr><td></td><td></td><td></td><td></td></tr></table>	Parts of Speech {1 word for each}				Noun	Proper Noun	Adjective	Verb					
Parts of Speech {1 word for each}																
Noun	Proper Noun	Adjective	Verb													
Friday			Write 1 connection made to the book: {text-text, text-self, text-world}													
Weekend			Write about your favorite part of the text													

Homework due Friday October 13th!!

Your name: _____

Reading a Bar Graph































1. How many rainy days were there in January in New York City? 1. _____
2. How many clear days were there? 2. _____
3. Does the scale on this graph count by 2s, 3s, 4s, or 5s? 3. _____
4. How many more sunny days than snowy days were there? 4. _____
5. How many more clear days than rainy days were there? 5. _____
6. How many days were there in January? 6. _____
7. If there were two less sunny days and two more snowy days, how many snowy days would there have been? 7. _____
8. Are there more rainy days or windy days? 8. _____


Name: _____

The Pumpkin Carving Contest

Monica, Wayne, Kiersten, and Derrick were in a pumpkin carving contest. There was a prize for the person who carved the most pumpkins.

Number of Pumpkins Carved

Monica	     
Wayne	       
Kiersten	    
Derrick	        


 = 4 pumpkins

- How many pumpkins did Monica carve? 1. _____
- How many pumpkins did Wayne carve? 2. _____
- How many pumpkins did Kiersten carve? 3. _____
- How many pumpkins did Derrick carve? 4. _____
- How many more pumpkins did Derrick carve than Kiersten? 5. _____
- How many pumpkins did Monica and Wayne carve in all? 6. _____
- Which person carved the greatest number of pumpkins? 7. _____
- Which person carved the least number of pumpkins? 8. _____
- If Kiersten carved 4 more pumpkins, how many pumpkins would she have carved in all? 9. _____
- If Monica had carved 6 fewer pumpkins, how many would she have carved? 10. _____
- How many more pumpkins did Wayne carve than Monica? 11. _____
- How many pumpkins did the 4 contestants carve altogether? 12. _____

Name: _____

Elapsed Time


Going to the Movies




Attack of the 50ft Turnip plays at 7:10. It is now quarter to seven.
How long before the movie starts?




It takes 30 minutes to drive to the movie theater.
They Saved Frankenstein's Lunch begins playing
at ten after 1. What is the latest you can leave home?



Mikey Mongoose begins at 2:35. It ends at 4:05. How long is
the movie?




You and your friend meet at the movie theater to see *Flying Ninja
Toenails of Death*. You arrive at 5:40. Your friend arrives at 6:12.
How long did you wait for your friend to arrive?



Nuthouse Rocks begins at 5:20. It is 1 hour and 50 minutes long.
What time does the movie end?

Name: _____

Elapsed Time



- a. How many hours is Sullivan's Hardware Store open on Friday? _____
- b. How long is Sullivan's open on Saturday? _____
- c. Dennis arrived at Sullivan's at 10:15 A.M. on Saturday. How long will he have to wait for the store to open? _____
- d. Suppose it is 6:30 P.M. on Wednesday. How much longer will the store be open? _____
- e. Suppose it is 6:30 P.M. on Saturday. How long ago did the store close? _____
- f. Suppose it is 4:30 on Friday. Janice wants to go to the hardware store. It will take her 35 minutes to drive to the store from home. Can she make it before the store closes? _____