


Name _____

Date _____


Use an area model to represent the following expressions. Then, record the partial products and solve.

1. 30×17




$$\begin{array}{r} 17 \\ \times 30 \\ \hline \\ + \\ \hline \end{array}$$

2. 40×58



$$\begin{array}{r} 58 \\ \times 40 \\ \hline \\ + \\ \hline \end{array}$$

3. 50×38



$$\begin{array}{r} 38 \\ \times 50 \\ \hline \\ + \\ \hline \end{array}$$

Draw an area model to represent the following expressions. Then, record the partial products vertically and solve.

4. 60×19

5. 20×44

Visualize the area model, and solve the following expressions numerically.

6. 20×88

7. 30×88

8. 70×47

9. 80×65