

BY: KRISTIN
GUYETTE


COINING



COINING

COLOR BY COIN

Name: _____



quarter

dime

nickel

penny

blue

purple

green










yellow



Name: _____

Penny Count








Find the value of the coins.

 <input type="text"/>	 <input type="text"/>	 <input type="text"/>
 <input type="text"/>	 <input type="text"/>	 <input type="text"/>
 <input type="text"/>	 <input type="text"/>	 <input type="text"/>

Name: _____

Nickel Count










Find the value of the coins.



Name: _____

Dime Count

Find the value of the coins.

 <input type="text"/>	 <input type="text"/>	 <input type="text"/>
 <input type="text"/>	 <input type="text"/>	 <input type="text"/>
 <input type="text"/>	 <input type="text"/>	 <input type="text"/>

Name: _____

Quarter Count










Find the value of the coins.



Name: _____

Penny and Nickel Count










Find the value of the coins.

 <input type="text"/>	 <input type="text"/>	 <input type="text"/>
 <input type="text"/>	 <input type="text"/>	 <input type="text"/>
 <input type="text"/>	 <input type="text"/>	 <input type="text"/>

Name: _____

Penny and Dime Count










Find the value of the coins.

 <input type="text"/>	 <input type="text"/>	 <input type="text"/>
 <input type="text"/>	 <input type="text"/>	 <input type="text"/>
 <input type="text"/>	 <input type="text"/>	 <input type="text"/>

Name: _____

Penny and Quarter Count










Find the value of the coins.

 <p>ONE CENT</p> <p>QUARTER DOLLAR</p> <p>LIBERTY</p> <p>ONE CENT</p> <p>ONE CENT</p>	 <p>QUARTER DOLLAR</p> <p>LIBERTY</p> <p>ONE CENT</p> <p>QUARTER DOLLAR</p> <p>QUARTER DOLLAR</p>	 <p>LIBERTY</p> <p>LIBERTY</p> <p>QUARTER DOLLAR</p> <p>ONE CENT</p> <p>ONE CENT</p>
 <p>ONE CENT</p> <p>LIBERTY</p> <p>ONE CENT</p> <p>ONE CENT</p> <p>QUARTER DOLLAR</p> <p>ONE CENT</p>	 <p>QUARTER DOLLAR</p> <p>ONE CENT</p> <p>ONE CENT</p> <p>QUARTER DOLLAR</p> <p>LIBERTY</p>	 <p>LIBERTY</p> <p>LIBERTY</p> <p>QUARTER DOLLAR</p> <p>QUARTER DOLLAR</p> <p>ONE CENT</p> <p>ONE CENT</p>
 <p>LIBERTY</p> <p>ONE CENT</p> <p>LIBERTY</p> <p>QUARTER DOLLAR</p> <p>ONE CENT</p> <p>ONE CENT</p>	 <p>QUARTER DOLLAR</p> <p>QUARTER DOLLAR</p> <p>LIBERTY</p> <p>LIBERTY</p> <p>ONE CENT</p> <p>ONE CENT</p>	 <p>QUARTER DOLLAR</p> <p>LIBERTY</p> <p>LIBERTY</p> <p>ONE CENT</p> <p>QUARTER DOLLAR</p>

Name: _____

Penny, Nickel, and Dime Count

Find the value of the coins.

 <p>_____</p>	 <p>_____</p>	 <p>_____</p>
 <p>_____</p>	 <p>_____</p>	 <p>_____</p>
 <p>_____</p>	 <p>_____</p>	 <p>_____</p>




Name: _____

Nickel and Dime Count

Find the value of the coins.

		
--	---	--










		
---	--	---

		
--	---	--

Name: _____

Nickel and Quarter Count




Find the value of the coins.

 <p>_____</p>	 <p>_____</p>	 <p>_____</p>
 <p>_____</p>	 <p>_____</p>	 <p>_____</p>
 <p>_____</p>	 <p>_____</p>	 <p>_____</p>

Name: _____

Nickel, Dime, and Quarter Count










Find the value of the coins.



Name: _____

Dime and Quarter Count










Find the value of the coins.

 <input type="text"/>	 <input type="text"/>	 <input type="text"/>
 <input type="text"/>	 <input type="text"/>	 <input type="text"/>
 <input type="text"/>	 <input type="text"/>	 <input type="text"/>

Name: _____

Mixed coins count










Find the value of the coins.

 <p>_____</p>	 <p>_____</p>	 <p>_____</p>
 <p>_____</p>	 <p>_____</p>	 <p>_____</p>
 <p>_____</p>	 <p>_____</p>	 <p>_____</p>

Name: _____

Mixed Coins Count

Find the value of the coins.

 <p>_____</p>	 <p>_____</p>	 <p>_____</p>
 <p>_____</p>	 <p>_____</p>	 <p>_____</p>
 <p>_____</p>	 <p>_____</p>	 <p>_____</p>

Name: _____

Just a Penny

Draw the coins to match the given value..

8¢

12¢

7¢

15¢

3¢

10¢

13¢

9¢

4¢

Name: _____

Just a Nickel

Draw the coins to match the given value..

15¢

35¢

60¢

45¢

20¢

75¢

90¢

10¢

65¢

Name: _____

Just a Dime

Draw the coins to match the given value..

30¢

50¢

60¢

80¢

20¢

70¢

90¢

10¢

40¢

Name: _____

Just a Quarter

Draw the coins to match the given value..

25¢

50¢

100¢

75¢

25¢

75¢

50¢

100¢

75¢

Name: _____

Just Pennies and Nickels

Draw the coins to match the given value..

29¢

53¢

76¢

82¢

35¢

48¢

71¢

93¢

68¢

Name: _____

Just Pennies and Dimes

Draw the coins to match the given value..

49¢

53¢

96¢

84¢

75¢

88¢

77¢

93¢

68¢

Name: _____

Just Pennies, Nickels, and Dimes

Draw the coins to match the given value..

39¢

58¢

26¢

74¢

53¢

88¢

49¢

20¢

3¢

Name: _____

Just Pennies and Quarters

Draw the coins to match the given value..

59¢

78¢

26¢

27¢

56¢

79¢

77¢

53¢

28¢

Name: _____

JUST Nickels and Dimes

Draw the coins to match the given value..

75¢

30¢

85¢

15¢

65¢

50¢

95¢

20¢

45¢

Name: _____

JUST NICKELS and QUARTERS

Draw the coins to match the given value..

80¢

35¢

90¢

45¢

50¢

65¢

55¢

20¢

70¢

Name: _____

JUST NICKELS, DIMES, and QUARTERS

Draw the coins to match the given value..

40¢

60¢

85¢

55¢

70¢

15¢

90¢

45¢

80¢

Name: _____

Just Dimes and Quarters

Draw the coins to match the given value..

85¢

35¢

95¢

45¢

60¢

75¢

55¢

80¢

70¢

Name: _____

Pennies, Nickels, Dimes, and Quarters

Draw the coins to match the given value..

88¢

42¢

63¢

71¢

34¢

22¢

84¢

55¢

19¢

Name: _____

Pennies, Nickels, Dimes, and Quarters

Draw the coins to match the given value..

24¢

79¢

56¢

38¢

27¢

82¢

97¢

36¢

48¢

Thank YOU!

Thank you for downloading this freebie! I hope this meets your needs and can help your students learn how to count coins!

-Kristin Guyette

