

May use a calculator

Common Assessment Review for 6.G.A.2 and 6.G.A.4

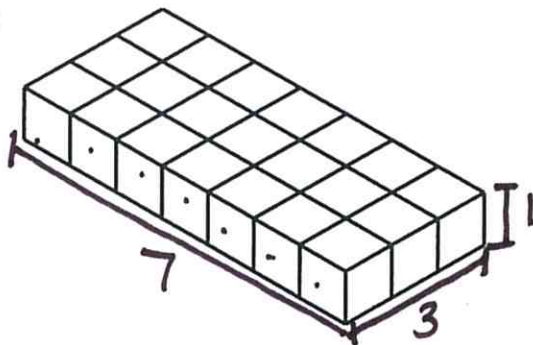
NAME: \_\_\_\_\_

Page 25, 26

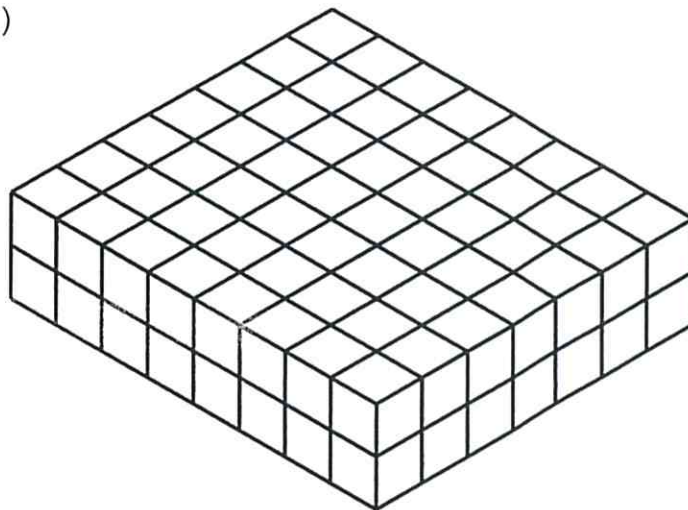
$$V = l \cdot w \cdot h$$

- 1.) 6.G.A.2 Which of the rectangular prisms have a volume of  $1\frac{3}{4}$  units<sup>3</sup>, given each cube is defined by the fractional edge length of  $\frac{1}{4}$  inch? Choose all correct answers.

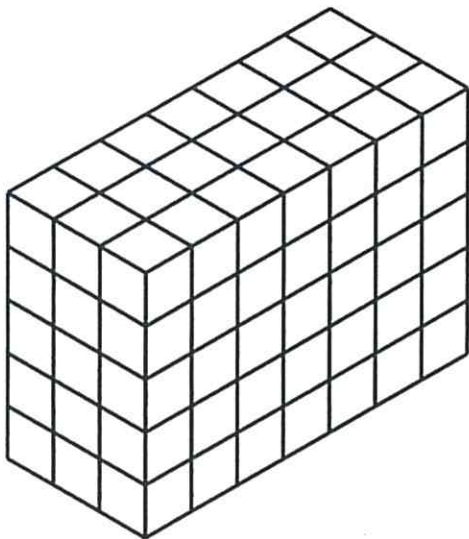
a.)



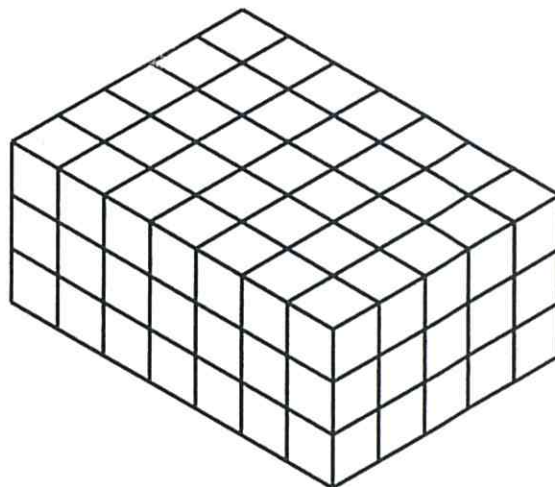
b.)



c.)



d.)



Follow steps in foldable on Page 26.