


# GRADE 1 – UNIT 3 PRE-TEST

Kevin has 8 beads. Three are black and the rest are white. Which of the following pictures and number models show how many beads are white? 1.OA.1

1)  $8 + 3 = 11$  Yes No

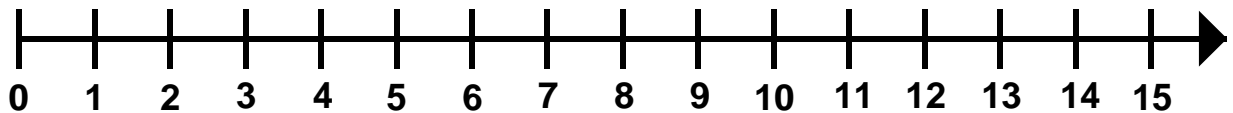
2)  Yes No

3)  $8 - 3 = 5$  Yes No

4) Jose has 5 baseball cards. Roy gave him 8 more baseball cards. How many baseball cards does Jose have?

(Show your answer using the number line.)

1.OA.1/1.OA.6

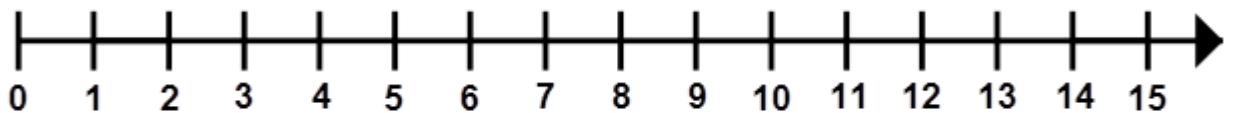


Jose has \_\_\_\_\_ baseball cards.

5) There were 14 students on the bus. 6 students got off the bus. How many students are left on the bus?

(Show your answer using the number line.)

1.OA.1/1.OA.6

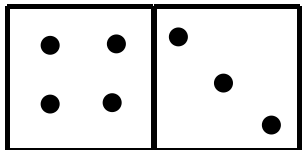


There are \_\_\_\_\_ student on the bus.

Which of the following shows  $4 + 3$

1.OA.6

6)



Yes

No

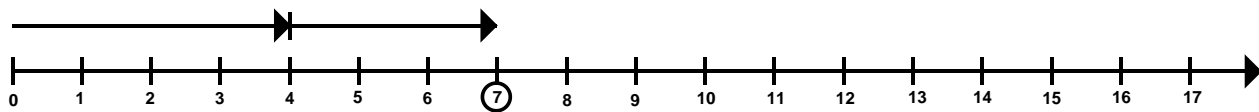
7)



Yes

No

8)



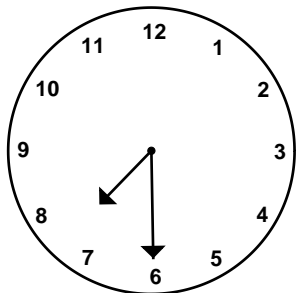
Yes

No

Which clock reads 7:30?

1.MD.3

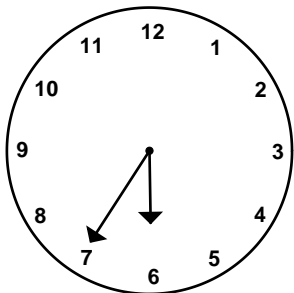
9)



Yes

No

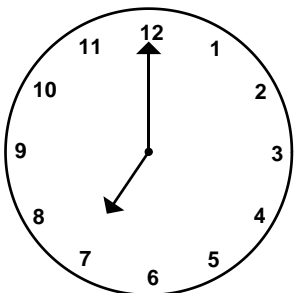
10)



Yes

No

11)




Yes

No

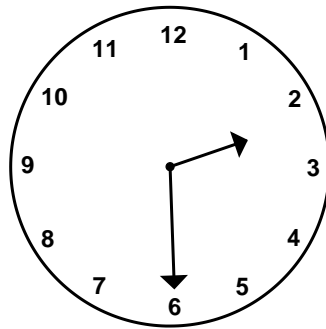
12) Draw the hour hand to show 11:00.

1.MD.3



13) Record the time.

1.MD.3

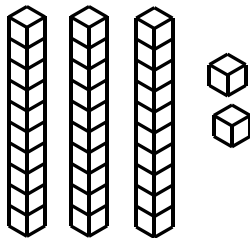


half-past \_\_\_\_\_ o'clock

Which of the following show 23?

1.NBT.1

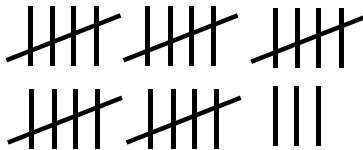
14)



Yes

No

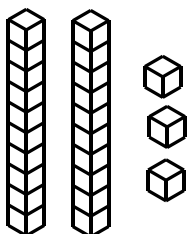
15)



Yes

No

16)



Yes

No

Complete the sequence.


1.NBT.1

17)

25 , 26 , 27 ,      ,      ,     

18) Count the buttons below.

1.NBT.1



There are \_\_\_\_\_ buttons.