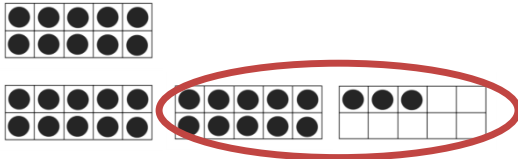


Name \_\_\_\_\_

Date \_\_\_\_\_


### Find the Hidden Teen Number

Show each number on your Rekenrek with your partner. Write how many. Circle the teen number inside the big number. Draw a line from the big number to the teen number that hides inside it.




33

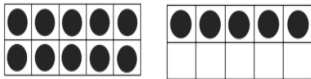
18



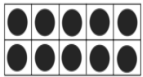
15




13



17



11



12

