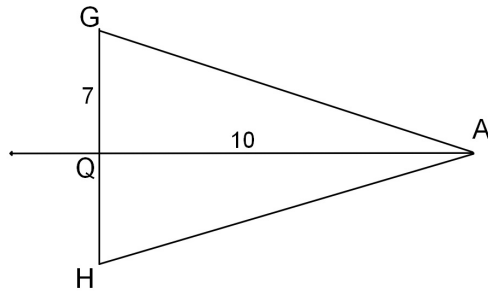


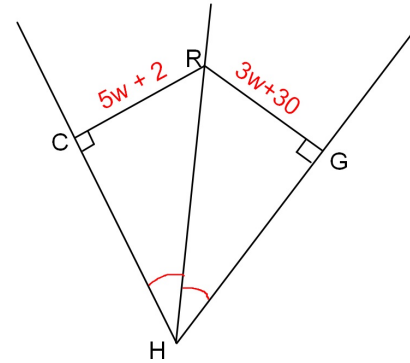
Bellwork Tuesday, February 4, 2014

1. Given \overrightarrow{AQ} is the \perp bisector of \overline{GH} find the following.

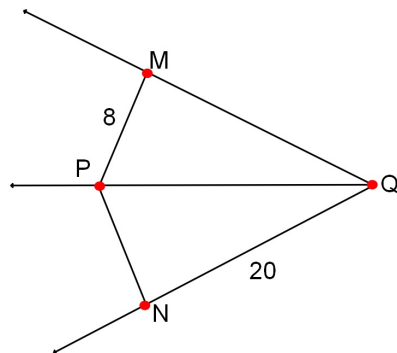
- a. \overline{GH} b. \overline{AG} c. \overline{AH}



2. Find the value of w .



3. \overline{QP} bisects $\angle MQN$. Find the length of \overline{PQ}



4. Find the value of y .

