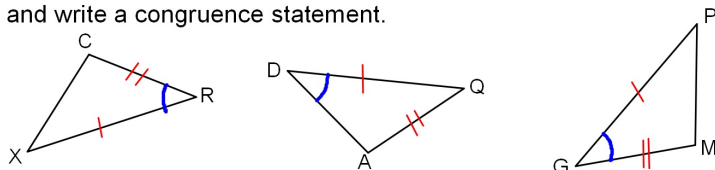
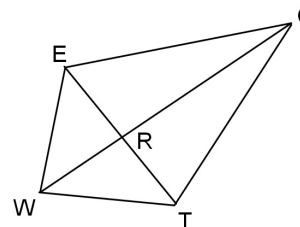


1. Which pair of triangles are congruent? State a reason and write a congruence statement.



2. \overline{WC} bisects $\angle EWT$ and $\overline{EC} \cong \overline{TC}$ and \overline{WC} is the \perp bisector of \overline{ET} . What triangles are congruent, if any? If there are congruent triangles state a reason and write a congruence statement.

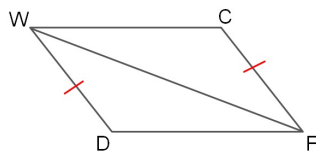


Use the given figure and any given information. What else must you know to prove the pair of triangles is congruent using the given method?

3. Use SAS

Given: $\angle C \cong \angle D$

Additional information needed:



4. Use SSS

Given: \overline{GT} and \overline{RK} bisect each other.

Additional information needed:

