

Chapter 15 Earth's Atmosphere -

as you read

What You'll Learn

- Identify the gases in Earth's atmosphere.
- Describe the structure of Earth's atmosphere.
- Explain what causes air pressure.

Why It's Important

The atmosphere makes life on Earth possible.

Review Vocabulary

pressure: force exerted on an area

New Vocabulary

- atmosphere
- troposphere
- ionosphere
- ozone layer
- ultraviolet radiation
- chlorofluorocarbon

Importance of the Atmosphere

Earth's atmosphere, shown in **Figure 1**, is a thin layer of air that forms a protective covering around the planet. If Earth had no atmosphere, days would be extremely hot and nights would be extremely cold. Earth's atmosphere maintains a balance between the amount of heat absorbed from the Sun and the amount of heat that escapes back into space. It also protects life-forms from some of the Sun's harmful rays.

Makeup of the Atmosphere

Earth's atmosphere is a mixture of gases, solids, and liquids that surrounds the planet. It extends from Earth's surface to outer space. The atmosphere is much different today from what it was when Earth was young.

Earth's early atmosphere, produced by erupting volcanoes, contained nitrogen and carbon dioxide, but little oxygen. Then, more than 2 billion years ago, Earth's early organisms released oxygen into the atmosphere as they made food with the aid of sunlight. These early organisms, however, were limited to layers of ocean water deep enough to be shielded from the Sun's harmful rays, yet close enough to the surface

to receive sunlight. Eventually, a layer rich in ozone (O_3) that protects Earth from the Sun's harmful rays formed in the upper atmosphere. This protective layer eventually allowed green plants to flourish all over Earth, releasing even more oxygen. Today, a variety of life forms, including you, depends on a certain amount of oxygen in Earth's atmosphere.




Figure 1 Earth's atmosphere, as viewed from space, is a thin layer of gases. The atmosphere keeps Earth's temperature in a range that can support life.

Gases in the Atmosphere Today's atmosphere is a mixture of the gases shown in **Figure 2**. Nitrogen is the most abundant gas, making up 78 percent of the atmosphere. Oxygen actually makes up only 21 percent of Earth's atmosphere. As much as four percent of the atmosphere is water vapor. Other gases that make up Earth's atmosphere include argon and carbon dioxide.

The composition of the atmosphere is changing in small but important ways. For example, car exhaust emits gases into the air. These pollutants mix with oxygen and other chemicals in the presence of sunlight and form a brown haze called smog. Humans burn fuel for energy. As fuel is burned, carbon dioxide is released as a by-product into Earth's atmosphere. Increasing energy use may increase the amount of carbon dioxide in the atmosphere.

Solids and Liquids in Earth's Atmosphere In addition to gases, Earth's atmosphere contains small, solid particles such as dust, salt, and pollen. Dust particles get into the atmosphere when wind picks them up off the ground and carries them along. Salt is picked up from ocean spray. Plants give off pollen that becomes mixed throughout part of the atmosphere.

The atmosphere also contains small liquid droplets other than water droplets in clouds. The atmosphere constantly moves these liquid droplets and solids from one region to another. For example, the atmosphere above you may contain liquid droplets and solids from an erupting volcano thousands of kilometers from your home, as illustrated in **Figure 3**.

On June 12, 1991, Mount Pinatubo in the Philippines erupted, causing liquid droplets to form in Earth's atmosphere.

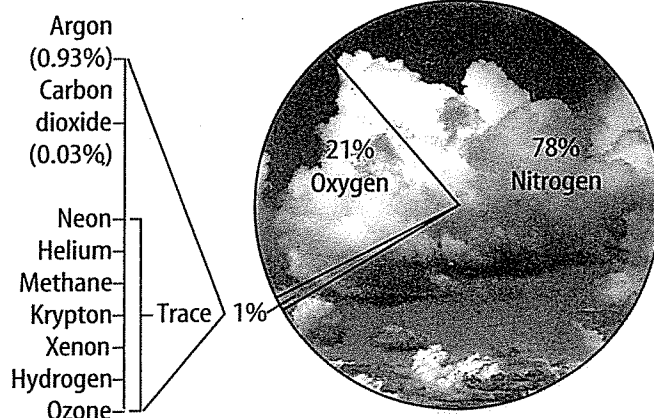
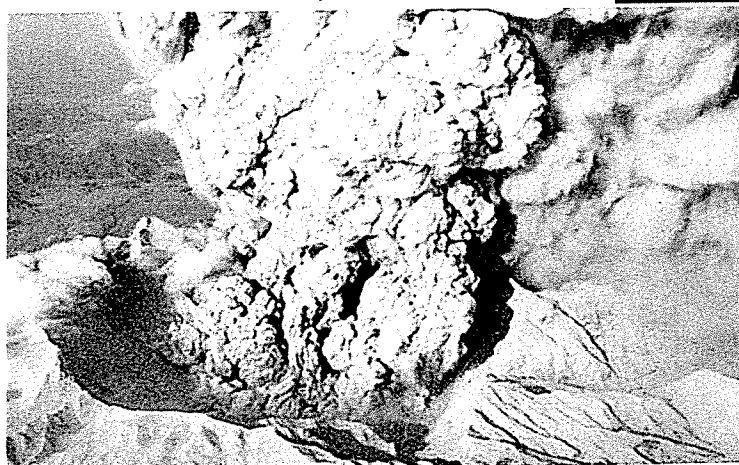



Figure 2 This circle graph shows the percentages of the gases, excluding water vapor, that make up Earth's atmosphere.

Determine Approximately what fraction of Earth's atmosphere is oxygen?

Figure 3 Solids and liquids can travel large distances in Earth's atmosphere, affecting regions far from their source.



Droplets of sulfuric acid from volcanoes can produce spectacular sunrises.

Topic: Earth's Atmospheric Layers

Visit earth.msscience.com for Web links to information about layers of Earth's atmosphere.

Activity Locate data on recent ozone layer depletion. Graph your data.

Layers of the Atmosphere

What would happen if you left a glass of chocolate milk on the kitchen counter for a while? Eventually, you would see a lower layer with more chocolate separating from upper layers with less chocolate. Like a glass of chocolate milk, Earth's atmosphere has layers. There are five layers in Earth's atmosphere, each with its own properties, as shown in **Figure 4**. The lower layers include the troposphere and stratosphere. The upper atmospheric layers are the mesosphere, thermosphere, and exosphere. The troposphere and stratosphere contain most of the air.

Lower Layers of the Atmosphere You study, eat, sleep, and play in the **troposphere** which is the lowest of Earth's atmospheric layers. It contains 99 percent of the water vapor and 75 percent of the atmospheric gases. Rain, snow, and clouds occur in the troposphere, which extends up to about 10 km.

The stratosphere, the layer directly above the troposphere, extends from 10 km above Earth's surface to about 50 km. As **Figure 4** shows, a portion of the stratosphere contains higher levels of a gas called ozone. Each molecule of ozone is made up of three oxygen atoms bonded together. Later in this section you will learn how ozone protects Earth from the Sun's harmful rays.

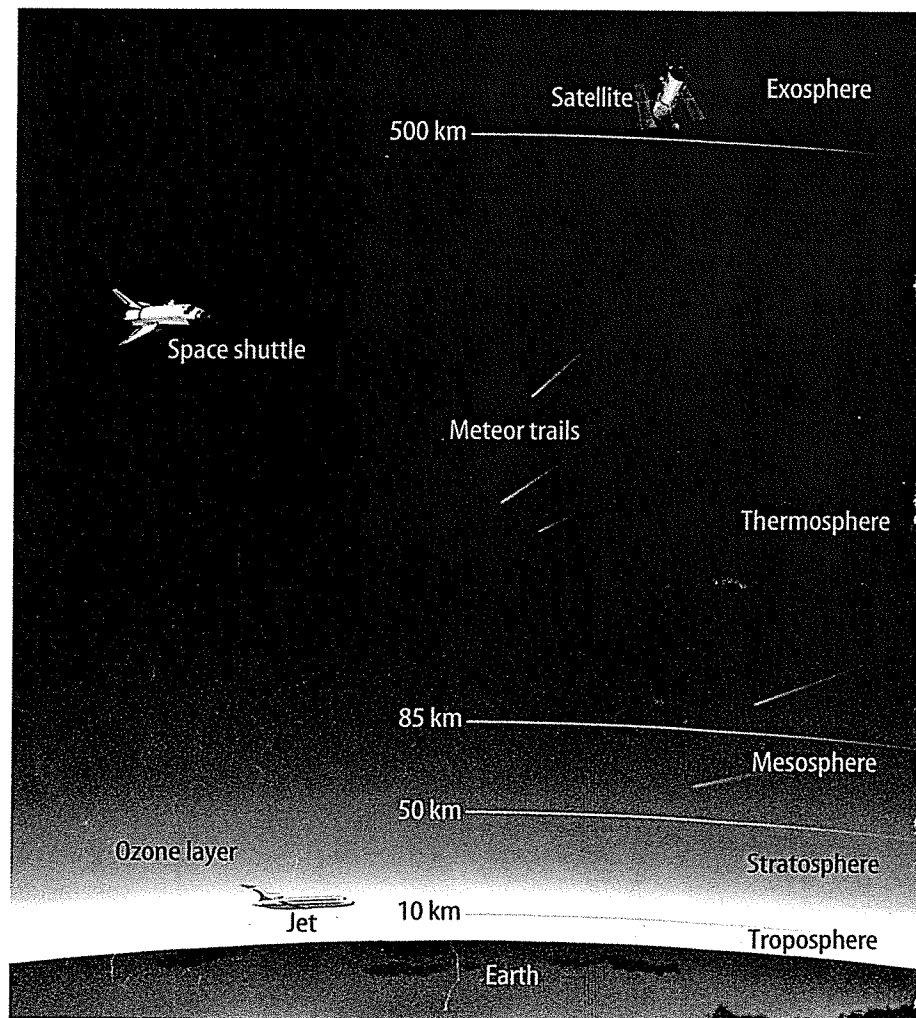


Figure 4 Earth's atmosphere is divided into five layers.

Describe the layer of the atmosphere in which you live.

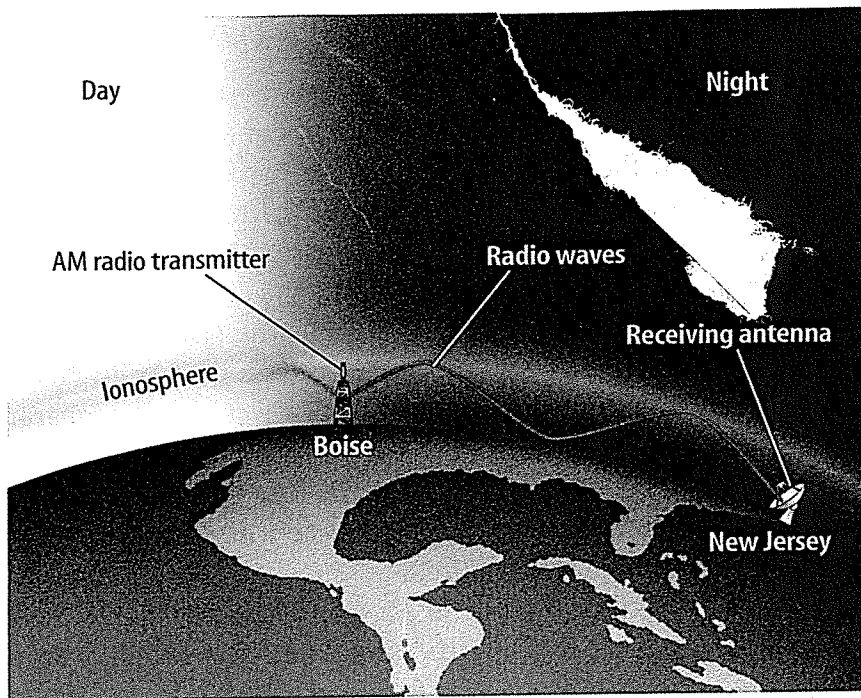


Figure 5 During the day, the ionosphere absorbs radio transmissions. This prevents you from hearing distant radio stations. At night, the ionosphere reflects radio waves. The reflected waves can travel to distant cities.

Describe what causes the ionosphere to change between day and night.


Upper Layers of the Atmosphere Beyond the stratosphere are the mesosphere, thermosphere, and exosphere. The mesosphere extends from the top of the stratosphere to about 85 km above Earth. If you've ever seen a shooting star, you might have witnessed a meteor in the mesosphere.

The thermosphere is named for its high temperatures. This is the thickest atmospheric layer and is found between 85 km and 500 km above Earth's surface.

Within the mesosphere and thermosphere is a layer of electrically charged particles called the **ionosphere** (i AH nuh sfuhr). If you live in New Jersey and listen to the radio at night, you might pick up a station from Boise, Idaho. The ionosphere allows radio waves to travel across the country to another city, as shown in **Figure 5**. During the day, energy from the Sun interacts with the particles in the ionosphere, causing them to absorb AM radio frequencies. At night, without solar energy, AM radio transmissions reflect off the ionosphere, allowing radio transmissions to be received at greater distances.

The space shuttle in **Figure 6** orbits Earth in the exosphere. In contrast to the troposphere, the layer you live in, the exosphere has so few molecules that the wings of the shuttle are useless. In the exosphere, the spacecraft relies on bursts from small rocket thrusters to move around. Beyond the exosphere is outer space.

Figure 6 Wings help move aircraft in lower layers of the atmosphere. The space shuttle can't use its wings to maneuver in the exosphere because so few molecules are present.



Reading Check

How does the space shuttle maneuver in the exosphere?

Atmospheric Pressure

Imagine you're a football player running with the ball. Six players tackle you and pile one on top of other. Who feels the weight more—you or the player on top? Like molecules anywhere else, atmospheric gases have mass. Atmospheric gases extend hundreds of kilometers above Earth's surface. As Earth's gravity pulls the gases toward its surface, the weight of these gases presses down on the air below. As a result, the molecules nearer Earth's surface are closer together. This dense air exerts more force than the less dense air near the top of the atmosphere. Force exerted on an area is known as pressure.

Like the pile of football players, air pressure is greater near Earth's surface and decreases higher in the atmosphere, as shown in **Figure 7**. People find it difficult to breathe in high mountains because fewer molecules of air exist there. Jets that fly in the stratosphere must maintain pressurized cabins so that people can breathe.

Figure 7 Air pressure decreases as you go higher in Earth's atmosphere.

molecules of air exist there. Jets that fly in the stratosphere must maintain pressurized cabins so that people can breathe.

Reading Check

Where is air pressure greater—in the exosphere or in the troposphere?

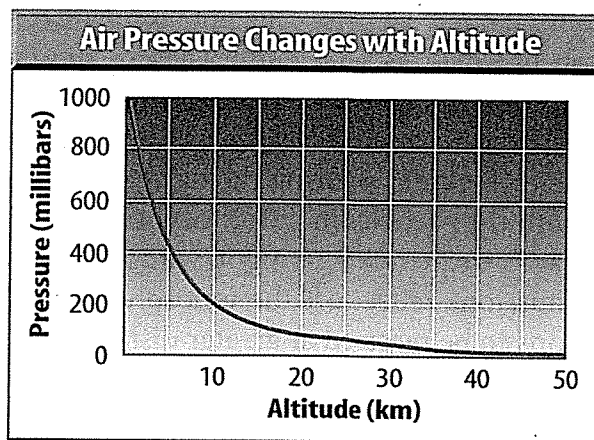
Applying Science

How does altitude affect air pressure?

Atmospheric gases extend hundreds of kilometers above Earth's surface, but the molecules that make up these gases are fewer and fewer in number as you go higher. This means that air pressure decreases with altitude.

Identifying the Problem

The graph on the right shows these changes in air pressure. Note that altitude on the graph goes up only to 50 km. The troposphere and the stratosphere are represented on the graph, but other layers of the atmosphere are not. By examining the graph, can you understand the relationship between altitude and pressure?



Solving the Problem

1. Estimate the air pressure at an altitude of 5 km.
2. Does air pressure change more quickly at higher altitudes or at lower altitudes?

Temperature in Atmospheric Layers

The Sun is the source of most of the energy on Earth. Before it reaches Earth's surface, energy from the Sun must pass through the atmosphere. Because some layers contain gases that easily absorb the Sun's energy while other layers do not, the various layers have different temperatures, illustrated by the red line in **Figure 8**.

Molecules that make up air in the troposphere are warmed mostly by heat from Earth's surface. The Sun warms Earth's surface, which then warms the air above it. When you climb a mountain, the air at the top is usually cooler than the air at the bottom. Every kilometer you climb, the air temperature decreases about 6.5°C .

Molecules of ozone in the stratosphere absorb some of the Sun's energy. Energy absorbed by ozone molecules raises the temperature. Because more ozone molecules are in the upper portion of the stratosphere, the temperature in this layer rises with increasing altitude.

Like the troposphere, the temperature in the mesosphere decreases with altitude. The thermosphere and exosphere are the first layers to receive the Sun's rays. Few molecules are in these layers, but each molecule has a great deal of energy. Temperatures here are high.

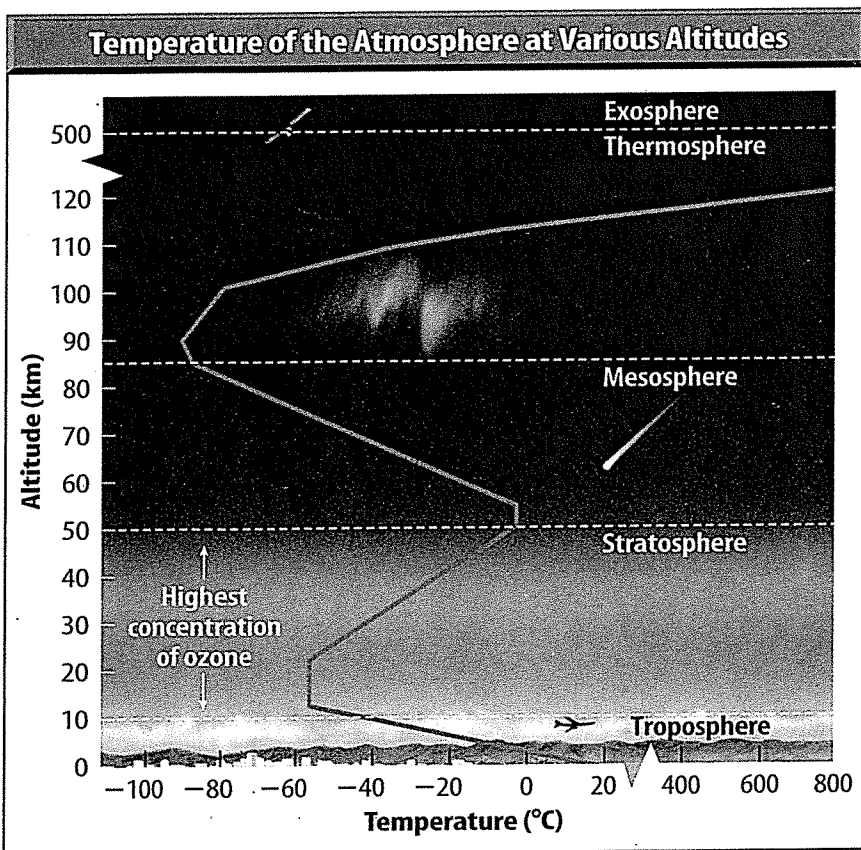


Figure 8 The division of the atmosphere into layers is based mainly on differences in temperature.

Determine Does the temperature increase or decrease with altitude in the mesosphere?



Determining if Air Has Mass

Procedure

1. On a pan balance, find the mass of an inflatable ball that is completely deflated.
2. Hypothesize about the change in the mass of the ball when it is inflated.
3. Inflate the ball to its maximum recommended inflation pressure.
4. Determine the mass of the fully inflated ball.

Analysis

1. What change occurs in the mass of the ball when it is inflated?
2. Infer from your data whether air has mass.