



Modeling Carbon-14 Dating

Procedure

1. Count out 80 red jelly beans.
2. Remove half the red jelly beans and replace them with green jelly beans.
3. Continue replacing half the red jelly beans with green jelly beans until only 5 red jelly beans remain. Count the number of times you replace half the red jelly beans.

Analysis

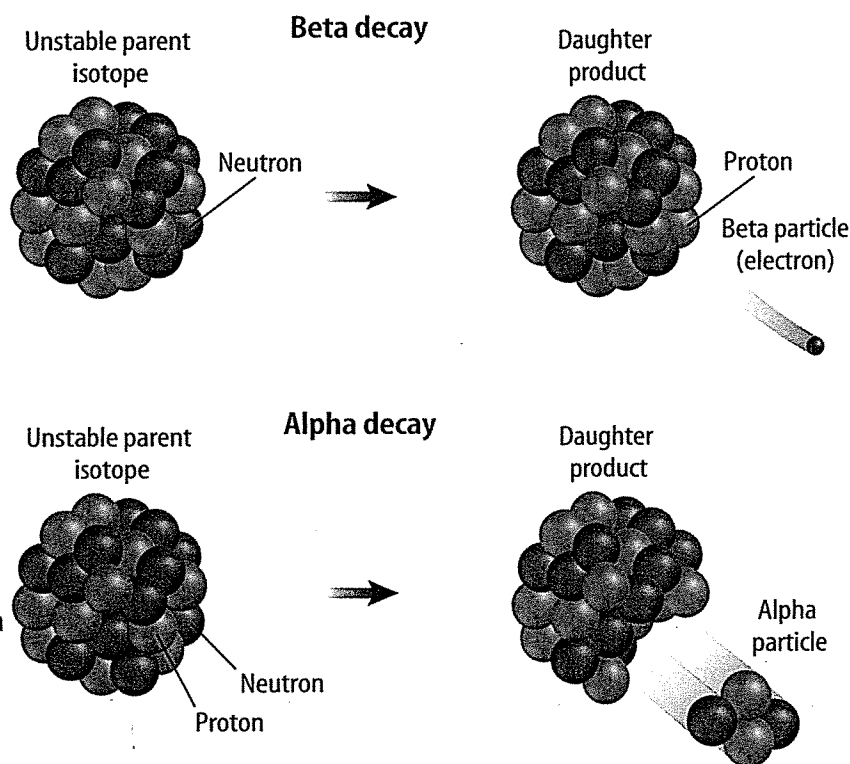
1. How did this activity model the decay of carbon-14 atoms?
2. How many half lives of carbon-14 did you model during this activity?
3. If the atoms in a bone experienced the same number of half lives as your jelly beans, how old would the bone be?

Figure 18 In beta decay, a neutron changes into a proton by giving off an electron. This electron has a lot of energy and is called a beta particle.

In the process of alpha decay, an unstable parent isotope nucleus gives off an alpha particle and changes into a new daughter product. Alpha particles contain two neutrons and two protons.

Alpha and Beta Decay In some isotopes, a neutron breaks down into a proton and an electron. This type of radioactive decay is called beta decay because the electron leaves the atom as a beta particle. The nucleus loses a neutron but gains a proton. When the number of protons in an atom is changed, a new element forms. Other isotopes give off two protons and two neutrons in the form of an alpha particle. Alpha and beta decay are shown in **Figure 18**.

Half-Life In radioactive decay reactions, the parent isotope undergoes radioactive decay. The daughter product is produced by radioactive decay. Each radioactive parent isotope decays to its daughter product at a certain rate. Based on this decay rate, it takes a certain period of time for one half of the parent isotope to decay to its daughter product. The **half-life** of an isotope is the time it takes for half of the atoms in the isotope to decay. For example, the half-life of carbon-14 is 5,730 years. So it will take 5,730 years for half of the carbon-14 atoms in an object to change into nitrogen-14 atoms. You might guess that in another 5,730 years, all of the remaining carbon-14 atoms will decay to nitrogen-14. However, this is not the case. Only half of the atoms of carbon-14 remaining after the first 5,730 years will decay during the second 5,730 years. So, after two half-lives, one fourth of the original carbon-14 atoms still remain. Half of them will decay during another 5,730 years. After three half-lives, one eighth of the original carbon-14 atoms still remain. After many half-lives, such a small amount of the parent isotope remains that it might not be measurable.



Radiometric Ages

Decay of radioactive isotopes is like a clock keeping track of time that has passed since rocks have formed. As time passes, the amount of parent isotope in a rock decreases as the amount of daughter product increases, as in **Figure 19**. By measuring the ratio of parent isotope to daughter product in a mineral and by knowing the half-life of the parent, in many cases you can calculate the absolute age of a rock. This process is called **radiometric dating**.

A scientist must decide which parent isotope to use when measuring the age of a rock. If the object to be dated seems old, then the geologist will use an isotope with a long half-life. The half-life for the decay of potassium-40 to argon-40 is 1.25 billion years. As a result, this isotope can be used to date rocks that are many millions of years old. To avoid error, conditions must be met for the ratios to give a correct indication of age. For example, the rock being studied must still retain all of the argon-40 that was produced by the decay of potassium-40. Also, it cannot contain any contamination of daughter product from other sources. Potassium-argon dating is good for rocks containing potassium, but what about other things?

Radiocarbon Dating Carbon-14 is useful for dating bones, wood, and charcoal up to 75,000 years old. Living things take in carbon from the environment to build their bodies. Most of that carbon is carbon-12, but some is carbon-14, and the ratio of these two isotopes in the environment is always the same. After the organism dies, the carbon-14 slowly decays. By determining the amounts of the isotopes in a sample, scientists can evaluate how much the isotope ratio in the sample differs from that in the environment. For example, during much of human history, people built campfires. The wood from these fires often is preserved as charcoal. Scientists can determine the amount of carbon-14 remaining in a sample of charcoal by measuring the amount of radiation emitted by the carbon-14 isotope in labs like the one in **Figure 20**. Once they know the amount of carbon-14 in a charcoal sample, scientists can determine the age of the wood used to make the fire.

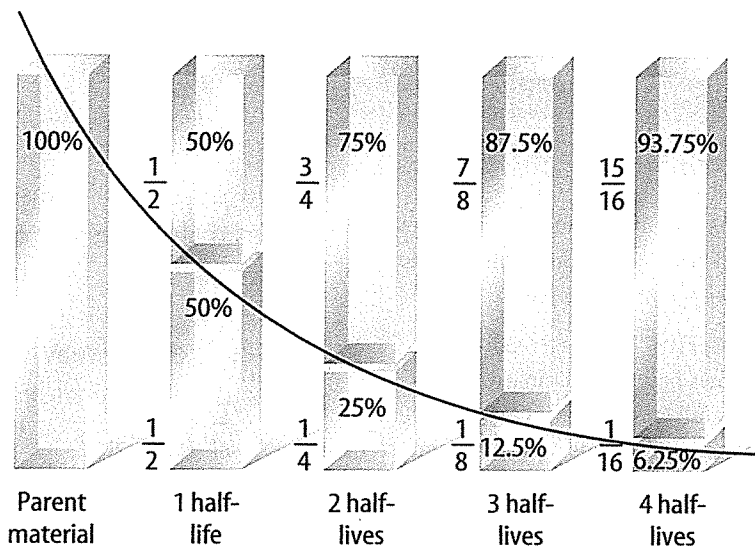


Figure 19 During each half-life, one half of the parent material decays to the daughter product. **Explain** how one uses both parent and daughter material to estimate age.

Figure 20 Radiometric ages are determined in labs like this one.



ScienceOnline

Topic: Isotopes in Ice Cores

Visit earth.msscience.com for Web links to information about ice cores and how isotopes in ice are used to learn about Earth's past.

Activity Prepare a report that shows how isotopes in ice cores can tell us about past Earth environments. Include how these findings can help us understand today's climate.

Age Determinations Aside from carbon-14 dating, rocks that can be radiometrically dated are mostly igneous and metamorphic rocks. Most sedimentary rocks cannot be dated by this method. This is because many sedimentary rocks are made up of particles eroded from older rocks. Dating these pieces only gives the age of the preexisting rock from which it came.

The Oldest Known Rocks Radiometric dating has been used to date the oldest rocks on Earth. These rocks are about 3.96 billion years old. By determining the age of meteorites, and using other evidence, scientists have estimated the age of Earth to be about 4.5 billion years. Earth rocks greater than 3.96 billion years old probably were eroded or changed by heat and pressure.

✓ Reading Check

Why can't most sedimentary rocks be dated radiometrically?


Applying Science

When did the Iceman die?

Carbon-14 dating has been used to date charcoal, wood, bones, mummies from Egypt and Peru, the Dead Sea Scrolls, and the Italian Iceman. The Iceman was found in 1991 in the Italian Alps, near the Austrian border. Based on carbon-14 analysis, scientists determined that the Iceman is 5,300 years old. Determine approximately in what year the Iceman died.

Half-Life of Carbon-14

Percent Carbon-14	Years Passed
100	0
50	5,730
25	11,460
12.5	17,190
6.25	22,920
3.125	



Reconstruction of Iceman

Identifying the Problem

The half-life chart shows the decay of carbon-14 over time. Half-life is the time it takes for half of a sample to decay. Fill in the years passed when only 3.125 percent of carbon-14 remain. Is there a point at which no carbon-14 would be present? Explain.

Solving the Problem

1. Estimate, using the data table, how much carbon-14 still was present in the Iceman's body that allowed scientists to determine his age.
2. If you had an artifact that originally contained 10.0 g of carbon-14, how many grams would remain after 17,190 years?

Uniformitarianism

Can you imagine trying to determine the age of Earth without some of the information you know today? Before the discovery of radiometric dating, many people estimated that Earth is only a few thousand years old. But in the 1700s, Scottish scientist James Hutton estimated that Earth is much older. He used the principle of **uniformitarianism**. This principle states that Earth processes occurring today are similar to those that occurred in the past. Hutton's principle is often paraphrased as "the present is the key to the past."

Hutton observed that the processes that changed the landscape around him were slow, and he inferred that they were just as slow throughout Earth's history. Hutton hypothesized that it took much longer than a few thousand years to form the layers of rock around him and to erode mountains that once stood kilometers high. **Figure 21** shows Hutton's native Scotland, a region shaped by millions of years of geologic processes.

Today, scientists recognize that Earth has been shaped by two types of change: slow, everyday processes that take place over millions of years, and violent, unusual events such as the collision of a comet or asteroid about 65 million years ago that might have caused the extinction of the dinosaurs.



Figure 21 The rugged highlands of Scotland were shaped by erosion and uplift.

section

3

review

Summary

Absolute Ages

- The absolute age is the actual age of an object.

Radioactive Decay

- Some isotopes are unstable and decay into other isotopes and particles.
- Decay is measured in half-lives, the time it takes for half of a given isotope to decay.

Radiometric Ages

- By measuring the ratio of parent isotope to daughter product, one can determine the absolute age of a rock.
- Living organisms less than 75,000 years old can be dated using carbon-14.

Uniformitarianism

- Processes observable today are the same as the processes that took place in the past.

Self Check

1. **Evaluate** the age of rocks. You find three undisturbed rock layers. The middle layer is 120 million years old. What can you say about the ages of the layers above and below it?
2. **Determine** the age of a fossil if it had only one eighth of its original carbon-14 content remaining.
3. **Explain** the concept of uniformitarianism.
4. **Describe** how radioactive isotopes decay.
5. **Think Critically** Why can't scientists use carbon-14 to determine the age of an igneous rock?

Applying Math

6. **Make and use a table** that shows the amount of parent material of a radioactive element that is left after four half-lives if the original parent material had a mass of 100 g.